

GWEITHDREFNOL

6CG15

Enw cyntaf _____

Cyfenw _____

Ysgol _____

Dosbarth _____


Dyddiad geni ○○ ○○ ○○○○

Dyddiad y prawf ○○ 05 2015

Cyfanswm y sgôr (uchafswm 35)



128923

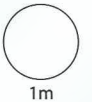


Llywodraeth Cymru
Welsh Government

1 Ysgrifennodd Anna y symiau hyn.

Ticiwch (✓) y rhai sy'n gywir. Rhowch groes (X) wrth y rhai sy'n anghywir.

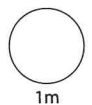
$12 + 78 = 100$	<input type="checkbox"/>
$65 + 45 = 100$	<input type="checkbox"/>
$17 + 83 = 100$	<input type="checkbox"/>



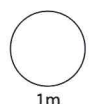
2 Gwnaeth Gethin y siart cyfrif hwn ar gyfer prosiect natur.

Creadur	Cyfrif
pryf cop/corryn	
buwch goch gota	
malwoden	
pryf genwair/ mwydyn	
chwilen	

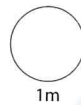
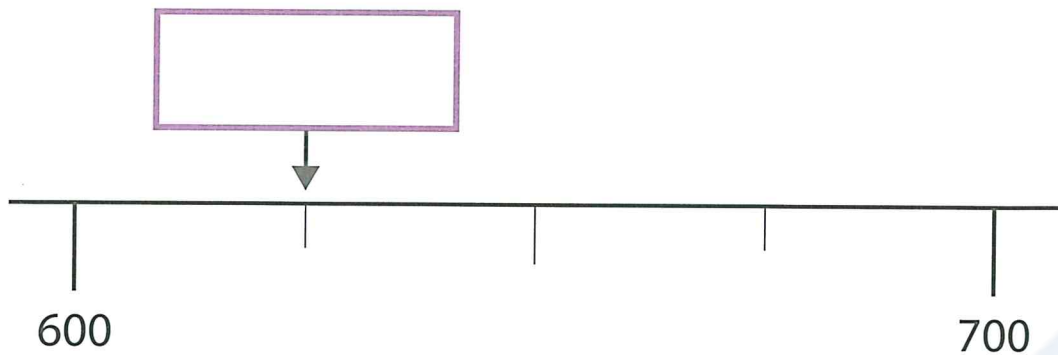
Faint o greaduriaid wnaeth Gethin eu gweld i gyd?



Pa greadur oedd y **modd**?

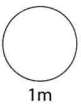
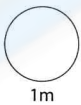


3 At ba rif mae'r saeth yn pwyntio?



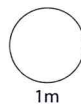
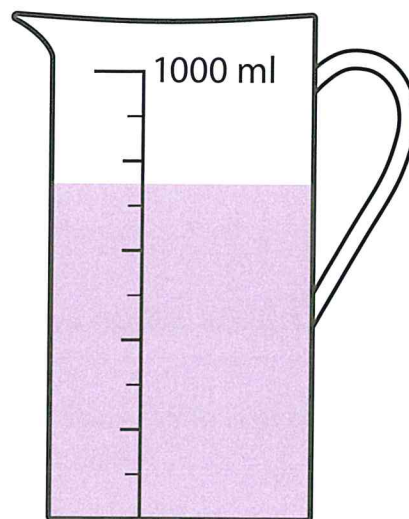

4 $978 + 253 =$

$407 - 259 =$



5 Edrychwch ar y ddŵr yn y jwg.

Pa **ffracsiwn** o litr o ddŵr sydd yn y jwg?




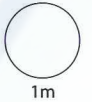
- 6 Dyma amserlen y bws o Fangor i Amlwch.

Faint o'r gloch mae'r bws yn cyrraedd Benllech?

Dydd Llun i ddydd Sadwrn

Gorsaf Fysiau Bangor	18:15
Ysbyty Gwynedd	18:25
Porthaethwy	18:32
Pentraeth	18:47
Benllech	18:56
Brynteg	19:02
Amlwch	19:26

Faint o amser mae'n ei gymryd i'r bws fynd o Bentraeth i Amlwch?



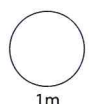
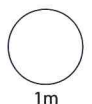
- 7 Mae Rhys yn golchi 10 car.

Mae'n cael £3.50 am bob car mae'n ei olchi.

Faint mae'n cael ei dalu i gyd?

Gwariodd £5.50 ar sebon a sbwng i olchi'r ceir.


Faint o **elw** mae'n ei wneud?



8

$12 \times 40 =$

$3.2 \times 50 =$



9

Yr amser a gymerwyd i redeg 100m

Athletwr	Amser (eiliadau)
Carl Lewis	9.86
Eddie Hart	9.9
Jesse Owens	10.2
Calvin Smith	9.93

Rhowch yr **amserau** yn eu trefn.

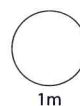
y cyflymaf

yr arafaf



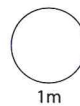
Cyfrifwch y **gwahaniaeth** rhwng yr amser cyflymaf a'r amser arafaf.

o eiliadau



10

$$8400\text{g} = \boxed{} \text{kg}$$




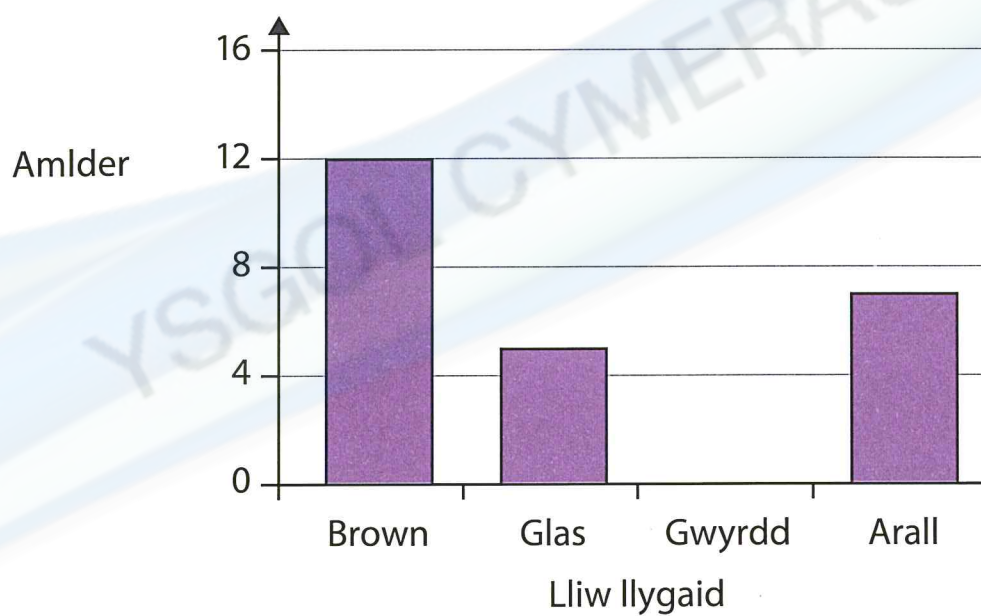
11

$$504 \div 7 = \boxed{}$$



12

Lliw Ilygaid plant Dosbarth 6P

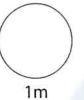


Mae 28 o blant yn Nosbarth 6P.

Lluniwch y bar ar gyfer y lliw Gwyrdd.

13 Ysgrifennwch y rhifau hyn mewn ffigurau.

chwedeg mil, dau gant →



un filiwn →



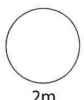
14



Pris un tun: 69c
Cynnig arbennig:
Tri thun am £1.29

Mae angen **tri** thun ar Layla.

Faint mae'n ei arbed drwy brynu'r cynnig arbennig?



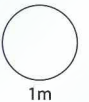
CYFANSWM



15 Mae Catrin yn mesur faint o law sy'n disgyn bob dydd am bum diwrnod.

1.2mm 0.6mm 0mm 0.8mm 2.5mm

Beth oedd **cyfanswm** y glawiad?

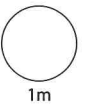


16 Ticiwch (✓) unrhyw gyfrifiadau sy'n rhoi'r un ateb â 25% o 50

$\frac{1}{4}$ 50

$\frac{1}{2}$ 100

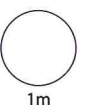
50% o 25




17 Mae Nia'n taflu dis bum gwaith a dyma'r sgoriau mae'n eu cael.

6 1 5 2 1

Beth yw sgôr **cymedrig** Nia?



18 Cyfrifwch 167×43



19

Siop dillad ysgol

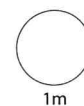
Siwmpwr £8.99

Tei £1.45

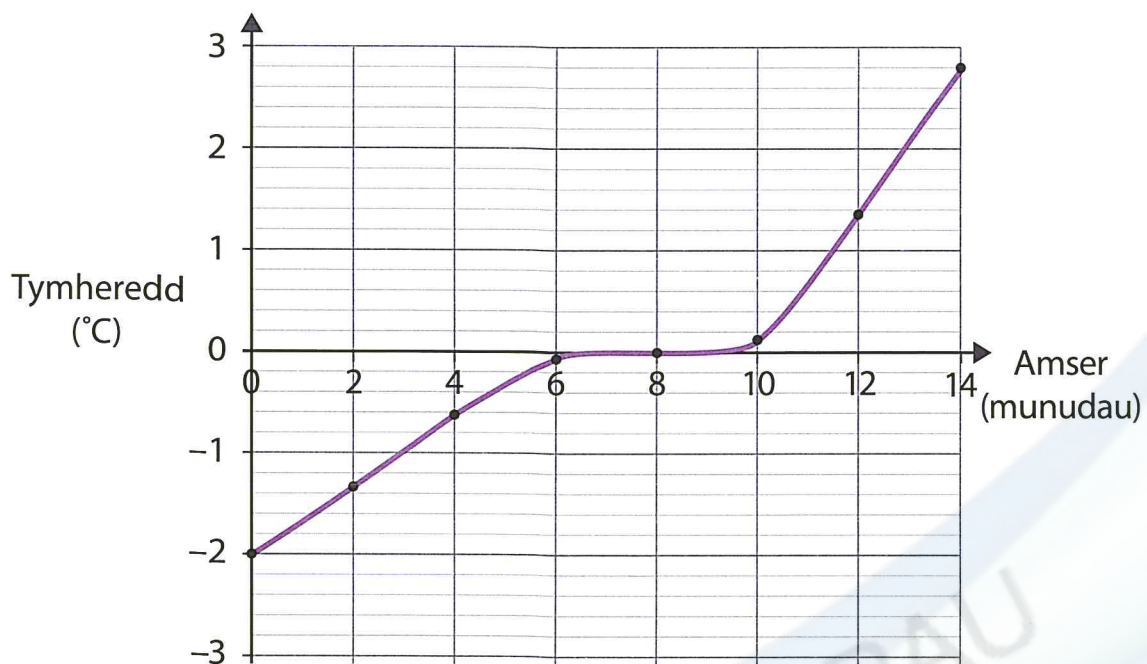
Crys £3.98

Ym mha fagiau mae digon o arian i brynu
un siwmpwr, **un** tei ac **un** crys?

Ticiwch (✓) bob bag sydd â digon o arian ynddo.



- 20 Mae'r graff yn dangos tymheredd rhew wrth iddo doddi.



Y tymheredd ar y dechrau oedd

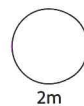
°C

Ar ôl 14 munud, y tymheredd oedd

°C

Felly, y **cynnydd** yn y tymheredd oedd

°C



- 21 Mae Aled a Jake yn rhannu arian yn y gymhareb 1 : 2

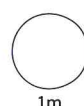
Rhowch **gylch** o amgylch y ffracsiwn isod sy'n dangos pa gyfran o'r arian a gafodd **Aled**.

$\frac{1}{2}$

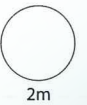
$\frac{1}{3}$

$\frac{2}{3}$

$\frac{2}{1}$



22 Cyfrifwch 15% o £250

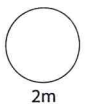



23



Mae arwynebedd y petryal llwyd **yr un fath ag arwynebedd** y petryal gwyn.

Cyfrifwch faint yw lled y petryal gwyn.



CYFANSWM



YSGOL CYMERAU