

GWEITHDREFNOL

6CG14

Enw cyntaf _____

Cyfenw _____

Ysgol _____

Dosbarth _____


Dyddiad geni ○○ ○○ ○○○○

Dyddiad y prawf ○○ 05 2014

Cyfanswm y sgôr (uchafswm 35)

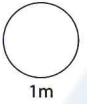


117569



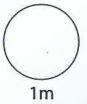
Llywodraeth Cymru
Welsh Government

1 Adiwch 76 a 34



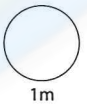
2

$9 \times 7 =$



$6 \times$

$= 72$



3 Rhowch gylch o amgylch y rhif lle mae'r 4 yn cynrychioli **4 o ddegau**.

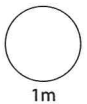
40 008

6043

7431

9054

14 568



Nawr ticiwch (✓) y rhif lle mae'r 4 yn cynrychioli **4 o filoedd**.

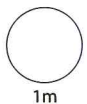
40 008

6043


7431

9054

14 568



4 Mesurwch hyd y llinell hon.



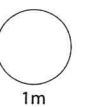
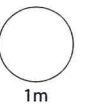
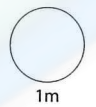
Rhowch eich ateb mewn **cm**.

Nawr rhowch eich ateb mewn **mm**.



5 Mae gan Cerys 600 o farblis.
Mae'n eu rhannu'n gyfartal rhwng 20 o bobl.
Faint o farblis mae pob person yn eu cael?

6 Tynnwch 4.3 o 13.1



CYFANSWM



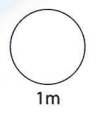
7

Y pellter mewn milltiroedd ar hyd y ffordd rhwng lleoedd yng Nghymru

	Bangor	Caerfyrddin	Abertawe	Y Rhyl
Bangor		133	159	31
Caerfyrddin	133		28	136
Abertawe	159	28		173
Y Rhyl	31	136	173	

Pa ddau le yw'r **pellaf** oddi wrth ei gilydd?

a

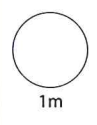


Mae Mr Jones yn gyrru o **Gaerfyrddin** i **Abertawe**.

Wedyn, mae'n gyrru o **Abertawe** i **Fangor**.

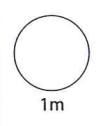
Faint o filltiroedd mae'n eu gyrru i gyd?

o filltiroedd



8

Beth yw $\frac{3}{5}$ o 60?

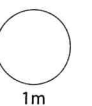
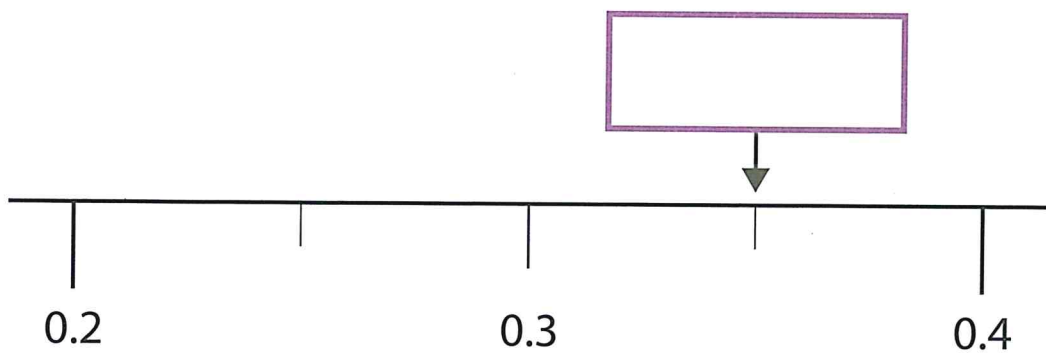
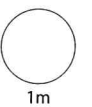
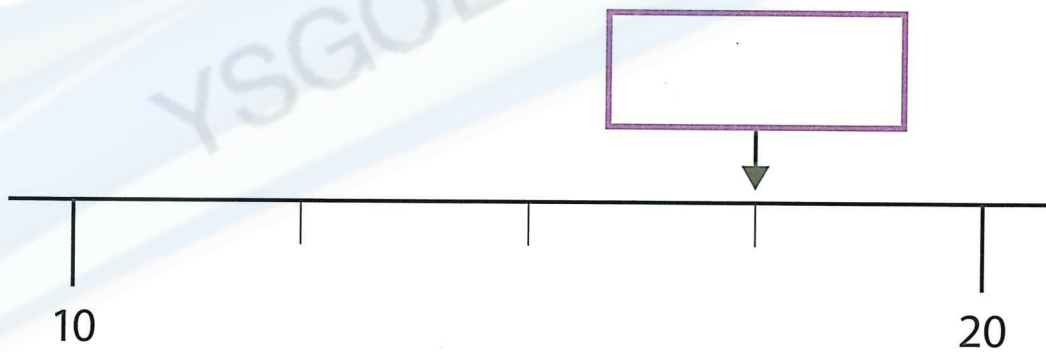


9 Cwblhewch y tabl gan ddefnyddio'r cloc 24-awr.

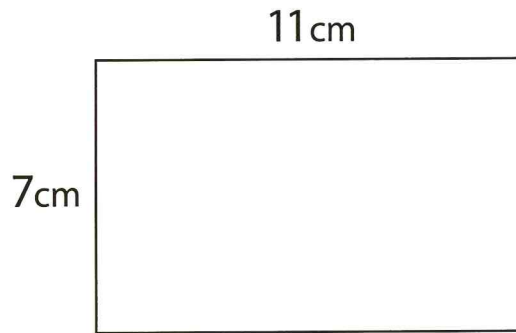
Hanner awr wedi chwech	Bore	06:30
Chwarter wedi deg	Bore	
Hanner awr wedi pedwar	Prynhawn	
Chwarter i wyth	Gyda'r nos	



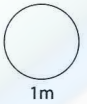
10 At ba rifau mae'r saethau'n pwyntio?



11 Beth yw **arwynebedd** y petryal hwn?




cm²



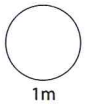
1m

12



Mae'r bag o datws yn pwyso

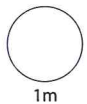
kg



1m

Mewn cilogramau a gramau, mae hyn yn

kg a g



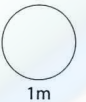
1m

13 Mae athro'n dweud:

Meddyliwch am rif.
Lluoswch y rhif â 2,
wedyn adiwch 6

Ateb Ellie yw 16

Pa rif roedd Ellie'n meddwl amdano?

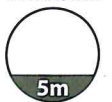
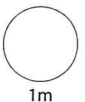


14 Talgrynnwch bob degolyn i'r rhif cyfan agosaf.

Mae un wedi'i wneud i chi.

7.8	•	
8.51	•	
7.2	•	7
8.47	•	8
		9

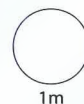
A line connects the decimal point of 7.2 to the number 7 in the column of integers.



15 Cwblhewch y tabl.

**Y tymheredd yn Abertawe ac yn Sydney
un diwrnod fis Rhagfyr diwethaf**

	Abertawe	Sydney	Y gwahaniaeth rhwng y tymheredd
Y tymheredd yn ystod y dydd	-1°C	25°C	°C
Y tymheredd yn ystod y nos	°C	18°C	21°C



16 Ysgrifennwch yr hydoedd hyn yn eu trefn.

50 milltir

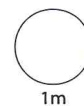
50 cm

50 km

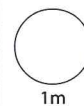
50 modfedd

y byrraf

yr hiraf



17 Rhannwch 3015 â 15



18 Cwblhewch y tabl ffracsiynau, degolion a chanrannau hwn.

Ysgrifennwch y ffracsiwn mor syml â phosibl.

Ffracsiwn	Degolyn	Canran
$\frac{1}{4}$	0.25	25%
		60%
$\frac{1}{20}$		%



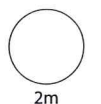
19 Mae'r rhifau ar y bocsys yn dangos faint o fatsys sydd ym mhob boc.



Beth yw nifer **cymedrig** y matsys.



o fatsys



CYFANSWM



20

Rysáit crempog

2 wy

200 gram o flawd

$\frac{1}{2}$ litr o laeth

Mae Owen yn gwneud crempogau ac yn defnyddio 5 wy.

Mae angen

gram o flawd a

litr o laeth arno.



21

Siop Esgidiau Mawr




Roedden nhw'n £10
Nawr gostyngiad
o 25%

Siop Traed Hapus

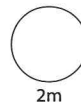


Roedden nhw'n £12
Nawr gostyngiad
o $\frac{1}{3}$

Yn mha siop mae'r esgidiau glaw rhataf, a faint yn rhatach ydyn nhw?

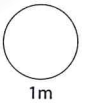
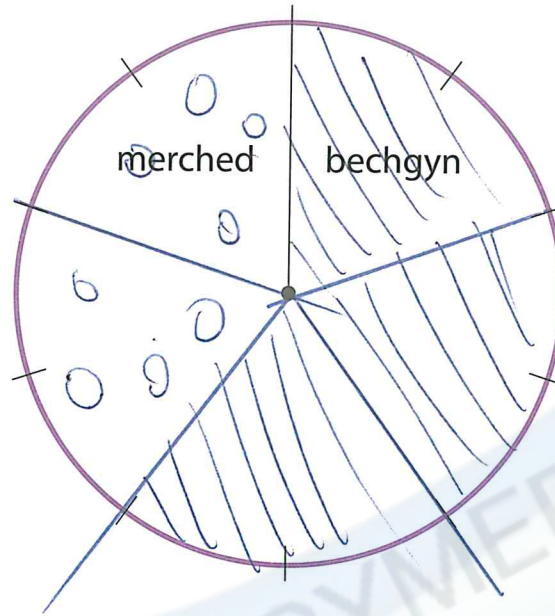


Maen nhw yn rhatach yn siop



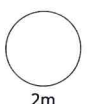
- 22 Yn nosbarth 6K, y gymhareb **merched** i **fechgyn** yw 2 : 3
Cwblhewch y siart cylch i ddangos y gymhareb.

Plant yn nosbarth 6K



- 23 Gwariodd Gethin £12 ar ddefnydd i wneud bagiau.
Mae'n gwneud 20 o fagiau ac yn eu gwerthu nhw i gyd am £1.75 yr un.
Faint o **elw** mae'n ei wneud i gyd?

£



CYFANSWM



6

YSGOL CYMERAU