

RHIFEDD

6CG13

Enw cyntaf _____

Cyfenw _____

Ysgol _____

Dosbarth _____

Dyddiad geni ○○ ○○ ○○○○

Dyddiad y prawf ○○ 05 2013

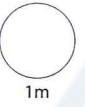
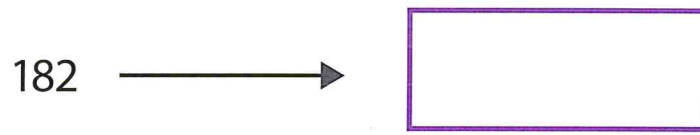
Sgôr cyfanswm (uchafswm 35)

Profion Rhifedd Cenedlaethol

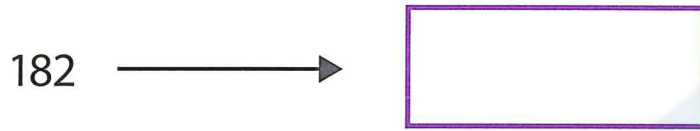


Llywodraeth Cymru
Welsh Government

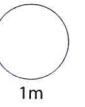
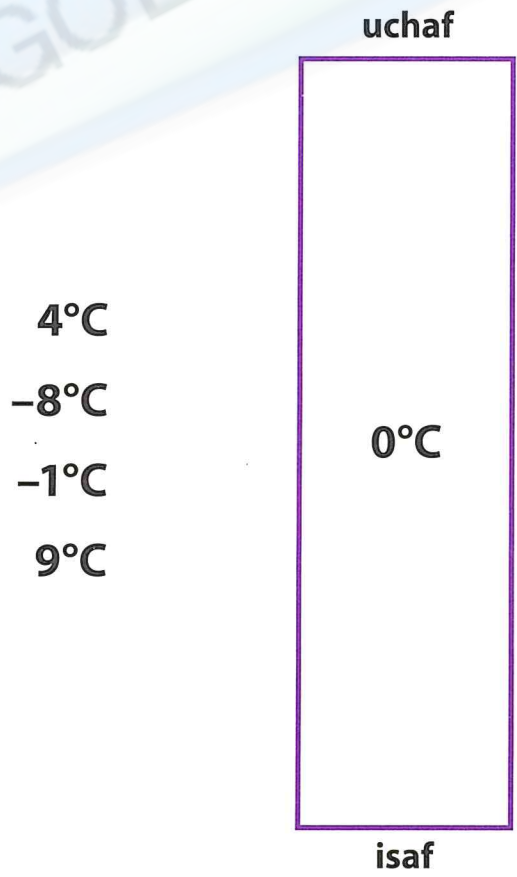
1 Talgrynnwch i'r **deg** agosaf.



Talgrynnwch i'r **cant** agosaf.







2 Ysgrifennwch y tymheredd yn eu trefn.



3

Cerbydau mewn maes parcio

Allwedd: mae  yn cynrychioli 4 cerbyd

| | |
|------|---|
| Bws |  |
| Lori |   |
| Car | <div style="border: 2px solid purple; width: 100%; height: 100%;"></div> |
| Beic |  |

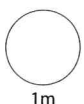
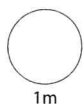
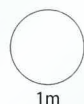
Mae 14 o geir. Cwblhewch y siart.

Faint o gerbydau sydd yna i gyd?


cerbyd

4

$$12 - 3 = 5 +$$



5



Mae Bethan yn bwyta **2** ddarn o'r pitsa hwn.


Mae Owen yn bwyta **5** darn.

Pa **ganran** sydd ar ôl?

%



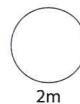
6



Cyfrifwch hyd y **pensil**.



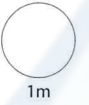
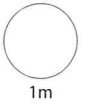
cm



7

$$90\text{mm} = \boxed{} \text{ cm}$$

$$400\text{cm} = \boxed{} \text{ m}$$



8

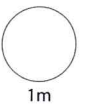
Faint o amlenni sydd mewn 32 o becynnau?

Un pecyn



200 o amlenni

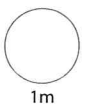
amlen



9

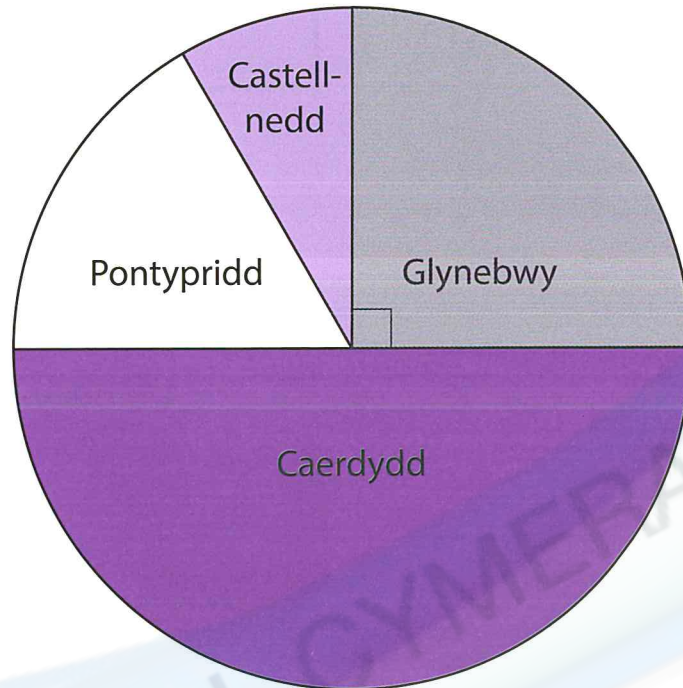
Cyfrifwch hanner 6.3kg.

kg



- 10 Gofynnodd Alun i'w ffrindiau ddewis eu hoff dîm rygbi o'r pedwar tîm yma.

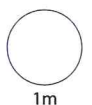
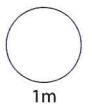
Mae'r siart cylch yn dangos y canlyniadau.



Dewisodd 6 o bobl **Glynebwy**.

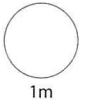
Faint ddewisodd Pontypridd?

Faint o bobl y gofynnodd Alun iddynt i gyd?



11

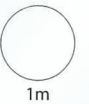
$$5009 \times 8 \div 8 =$$



1m

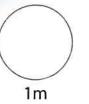
12

Ysgrifennwch bum can mil a dau ddeg mewn ffigurau.



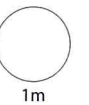
1m

Pa rif sydd **100 yn fwy** na phedwar deg mil?



1m

Pa rif sydd **1000 yn llai** nag 1 filiwn?



1m

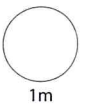
13

Ysgrifennwch y rhifau hyn yn eu trefn.

2.5 2 1.83 2.15

y lleiaf

y mwyaf



1m

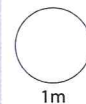


14 Amserlen trenau:

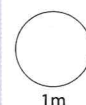
| | | | | |
|------------|-------|-------|-------|-------|
| Abertawe | 06:47 | 07:45 | 08:57 | 09:50 |
| Caerdydd | 07:50 | 08:50 | 09:55 | 10:55 |
| Henffordd | 08:51 | 09:51 | 10:56 | 11:56 |
| Amwythig | 09:43 | 10:48 | 11:48 | 12:53 |
| Stockport | 10:58 | 11:58 | 12:58 | 13:58 |
| Manceinion | 11:15 | 12:15 | 13:15 | 14:15 |

Mae Bev angen teithio o Henffordd i Fanceinion **cyn 1pm**.

Faint o'r gloch mae'r trên hwyraf y gall hi ei ddal o **Henffordd**?



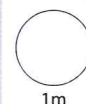
Pa mor hir mae'n ei gymryd i deithio o Abertawe i Gaerdydd ar drên **08.57**?



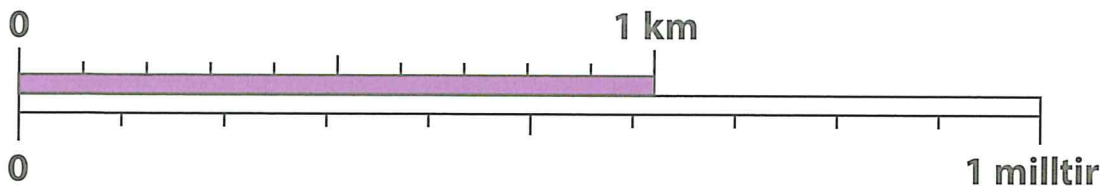
15 Gwariodd Gwen £19.67 ar wneud bisgedi.

Gwnaeth £34.25 wrth werthu'r bisgedi.

Faint o **elw** wnaeth hi?

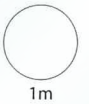


16



Defnyddiwch y raddfa i amcangyfrif y canlynol:

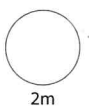
Mae 0.5 km tua'r un faint â



17

Cyfrifwch 22×43

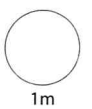
YSGOL CYMERAU



18

Mae 1000g o rawnwin yn costio £4

Faint yw cost 300g o rawnwin?



19 Cyfrif banc Hari:

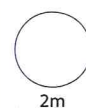
| Dyddiad | Talwyd allan | Talwyd i mewn | Gweddill |
|---------|--------------|---------------|----------|
| 10 Mai | | 150.00 | 150.00 |
| 12 Mai | 8.79 | | 141.21 |
| | 25.50 | | 115.71 |
| | 5.99 | | 109.72 |
| 13 Mai | | 50.00 | 159.72 |

Gyda'i gilydd, faint o arian a dalwyd allan ar 12 Mai?

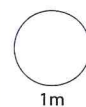


YSGOL CYMERAU

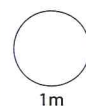
£



2m



1m



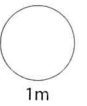
1m

20

$$4600 \div 20 = \boxed{}$$

$$275 \div 25 = \boxed{}$$

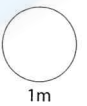
21 Ysgrifennwch $\frac{2}{5}$ fel **degolyn**.



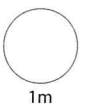
22 Dyma uchder pum blodyn haul (mewn cm).

23.2 22.7 25.5 24.8 22.5

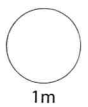
Beth yw **amrediad** uchder y blodau haul?

 cm

23 Cyfrifwch 5% o £120

 £

10% o £80 = 20% o

 £

YSGOL CYMERAU