

GWEITHDREFNOL

5CG18

Enw cyntaf _____

Cyfenw _____

Ysgol _____

Dosbarth _____

Dyddiad geni ○○ ○○ ○○○○

Dyddiad y prawf ○○ (05) (2018)

Cyfanswm y sgôr (uchafswm 35)



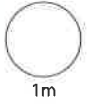
165086



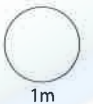
Llywodraeth Cymru
Welsh Government

- 1 Mae gan Mr Huws £45
Mae gan Mrs Huws £55
Faint sydd ganddyn nhw i gyd?

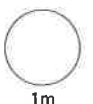
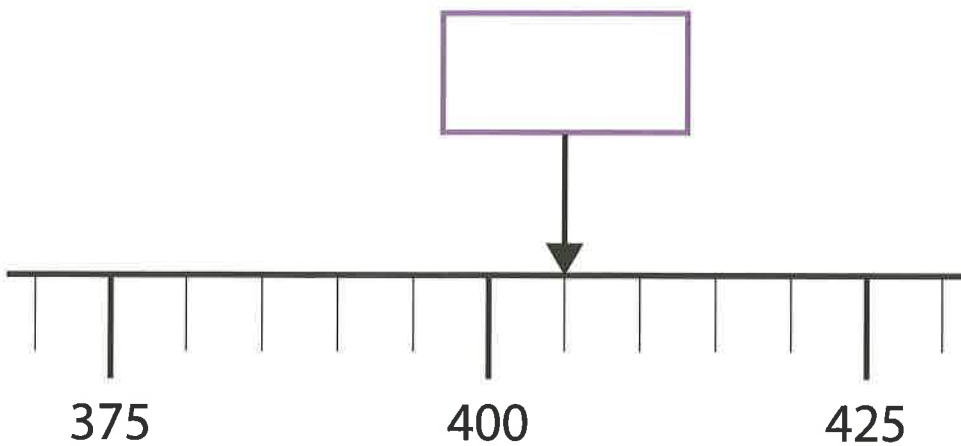
£



2 $350 - 51 =$



- 3 At ba rif mae'r saeth yn pwyntio?



4 Mae Amber yn dod o hyd i wybodaeth am ei theulu.

	Geni	Priodi	Nifer o blant
Alice	1931	1951	1
George	1953	1978	3
Alun	1976	2000	2
Carys	1979	2008	3
Rob	1984	2007	0

Ysgrifennwch enwau'r bobl sydd â 3 o blant.



Fe wnaeth Rob briodi ar ddiwrnod ei ben-blwydd.

Pan briododd e roedd e'n mlwydd oed.



5 Mae **hanner litr** o ddŵr mewn jwg.

Sawl mililitr yw hyn?

Rhowch gylch o amgylch yr ateb cywir.

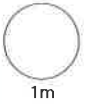
5ml 50ml 500ml 5000ml



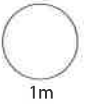
CYFANSWM



6 Talgrynnwch 8492 i'r **fil** agosaf.



Talgrynnwch 8492 i'r **cant** agosaf.



7 Mae 6 o blant yn rhannu pecynnau o fisgedi.

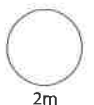
Mae 8 bisged mewn 1 pecyn.

Mae gan bob plentyn 4 bisged yr un.



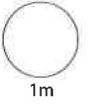
Faint o becynnau o fisgedi maen nhw'n eu rhannu?

o becynnau



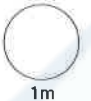
8

$$£68.78 + £45.22 = \boxed{\text{£}}$$



1m

$$£53.28 - £29.97 = \boxed{\text{£}}$$

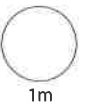


1m

9



Beth yw'r cyflymder a ddangosir?



1m

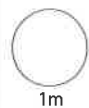
CYFANSWM



7m

10

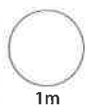
$$864 \div 4 =$$



Ysgrifennwch gyfrifiad i wirio eich ateb.

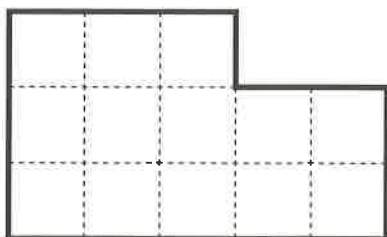
×

=



11

Mae'r siâp hwn o faint llawn.



Beth yw **perimedr** y siâp?

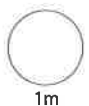
Rhowch gylch o amgylch eich ateb.

12cm

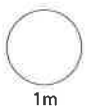
13cm

14cm

16cm



Beth yw **arwynebedd** y siâp?



12

0.9 fel ffracsiwn yw

—



1m

13

1.5 metr =

centimetr



1m

14



Oedolyn
£3.50




Plentyn
£2.25

Mae Mrs Patel yn talu £30 am docynnau.

Mae'n prynu 6 o docynnau oedolyn.

Sawl tocyn plentyn mae hi'n ei brynu?



tocyn plentyn



2m

CYFANSWM



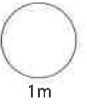
8m

15 Mae 50 o bobl mewn parti.

Mae $\frac{3}{5}$ o'r bobl yn oedolion.

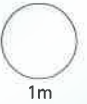
Faint o oedolion sydd yn y parti?

o oedolion



16

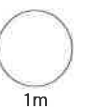
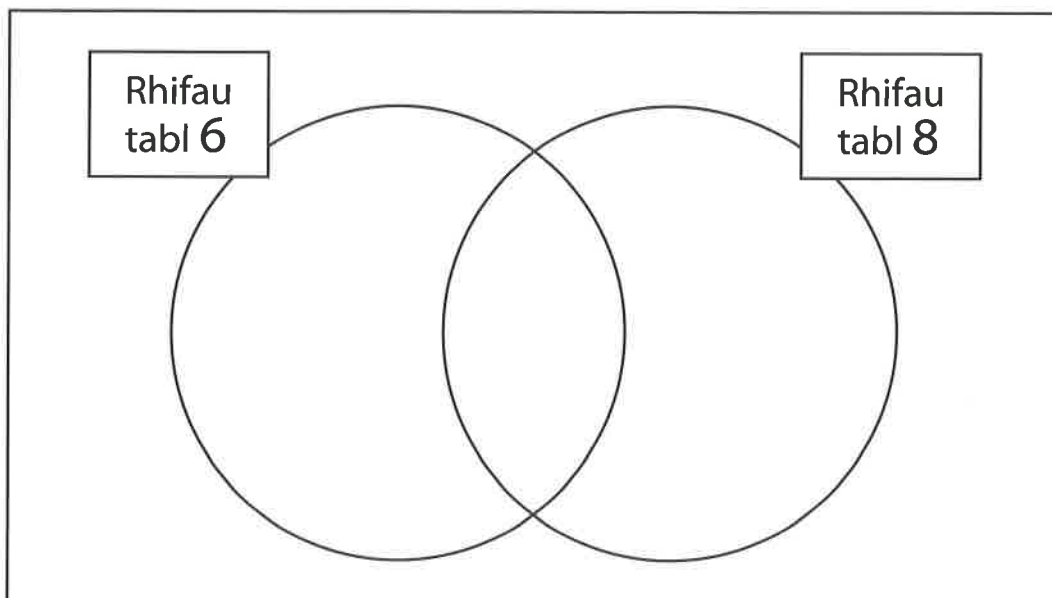
$$15.8 \div 10 =$$



17

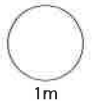
Ysgrifennwch y rhifau hyn yn y lleoedd cywir yn y diagram Venn:

24 56



18

Hanner 36 = dwbl



19

Ysgrifennwch y rhifau yn eu trefn.

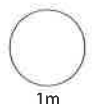
1.5 1.55 1.05

y lleiaf

y mwyaf



Ysgrifennwch y **gwahaniaeth** rhwng 17.3 ac 16.7



20

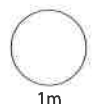
Mae Dean yn rhedeg ras mewn 11 munud a 30 eiliad.

Mae Marek yn cymryd 45 eiliad yn **llai**.

Pa mor hir gymerodd Marek i redeg y ras?

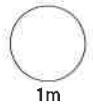
munud a

eiliad



23

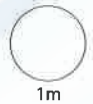
$$100 \div 5 = 1000 \div$$



1m

24

Ysgrifennwch y rhif sydd 500 yn llai na 100 000



1m

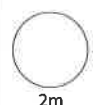
25

Mewn ysgol mae $\frac{5}{8}$ o'r plant yn fechgyn.

Mae 125 o fechgyn.

Faint o **blant** sydd yna i gyd?

o blant



2m

CYFANSWM



7m



YSGOL CYMERAU