

GWEITHDREFNOL

5CG17

Enw cyntaf _____

Cyfenw _____

Ysgol _____

Dosbarth _____

Dyddiad geni ○○ ○○ ○○○○

Dyddiad y prawf ○○ 05 2017

Cyfanswm y sgôr (uchafswm 35)



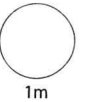
150264



Llywodraeth Cymru
Welsh Government


1

$$199 + 54 =$$



2

Gwers nofio
yn dechrau

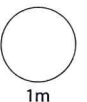


Gwers nofio
yn gorffen



Hyd y wers nofio yw

o funudau.



3

Rhowch gylch o amgylch y rhif isod sydd yn nhabl 4 ac yn nhabl 6

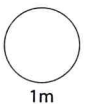
16

20

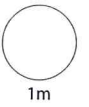
24

28

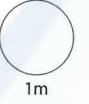
32



4 $\frac{1}{7}$ o 14 = 2 felly $\frac{3}{7}$ o 14 =



5 $90 \div 10 =$



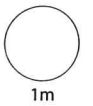
$4.3 \times 100 =$



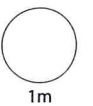
6 Dyma bedwar cerdyn rhif:

7 5 8 6


Defnyddiwch **dri** o'r cardiau i wneud y **rhif lleiaf** posibl.




Defnyddiwch bob un o'r pedwar cerdyn i wneud yr **eilrif mwyaf** posibl.



7



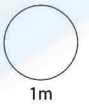
Taldra 4.1 metr



Taldra 2.9 metr

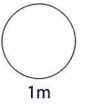
Ysgrifennwch y **gwahaniaeth** rhwng taldra y ddau eliffant hyn, mewn metrau.

metr



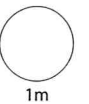
Nawr ysgrifennwch y gwahaniaeth mewn **centimetrau**.

centimetr

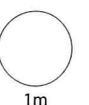


8

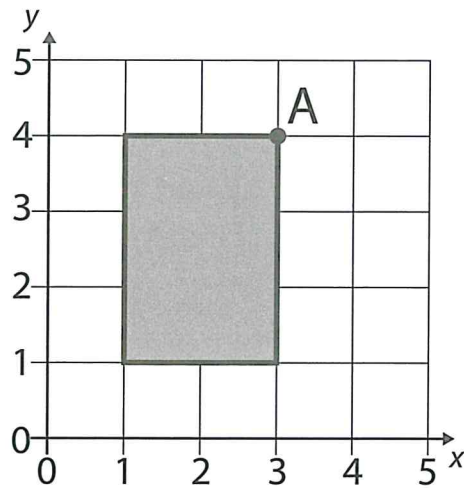
$$347 + 283 = \boxed{}$$



$$460 - 167 = \boxed{}$$

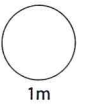


- 9 Mae'r petryal hwn ar grid centimetrau sgwâr.



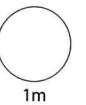
Ysgrifennwch gyfesurynnau pwynt A.

(,)



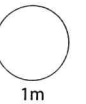
Beth yw arwynebedd y petryal?

cm²



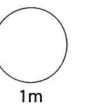
10

7000 metr = cilometr



11

Chwarter 900 =

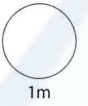


12 Mae Joe yn cyrraedd adref o'r ysgol am 4 : 08pm.

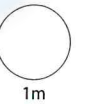
Gadawodd yr ysgol 28 munud cyn hynny.

Faint o'r gloch wnaeth Joe adael yr ysgol?

: pm



13 Ysgrifennwch y rhif sydd hanner ffordd rhwng 3.6 a 3.7



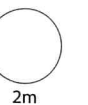
14 Mae gan Beca £20

Mae'n prynu gêm am £7.99 a llyfr am £6.50


Faint o arian sydd ar ôl?



£



15



Uchder y llong yw 57.3 metr

Talgrynnwch yr uchder i'r **deg metr** agosaf.

 metr

1m

16 Gwybodaeth:

- cafodd **90** o fabanod eu geni mewn ysbyty
- roedd **hanner** y babanod yn fechgyn
- roedd **20** o'r bechgyn yn pwysu llai na 3kg
- roedd **50** o'r babanod yn pwysu llai na 3kg

Defnyddiwch yr wybodaeth i gwblhau'r tabl.

| | Nifer y bechgyn | Nifer y merched |
|-------------|-----------------|-----------------|
| Llai na 3kg | 20 | |
| 3kg neu fwy | | |

2m

CYFANSWM

7m

17



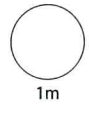
Tymheredd yr oergell 5°C

Tymheredd y rhewgell -18°C

Mae'r oergell yn gynhesach na'r rhewgell.

Faint yn gynhesach?

$^{\circ}\text{C}$

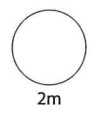


18 Mae **pum** darn 20c mewn £1

Cyfrifwch faint o ddarnau 20c sydd mewn £135

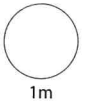


o ddarnau 20c



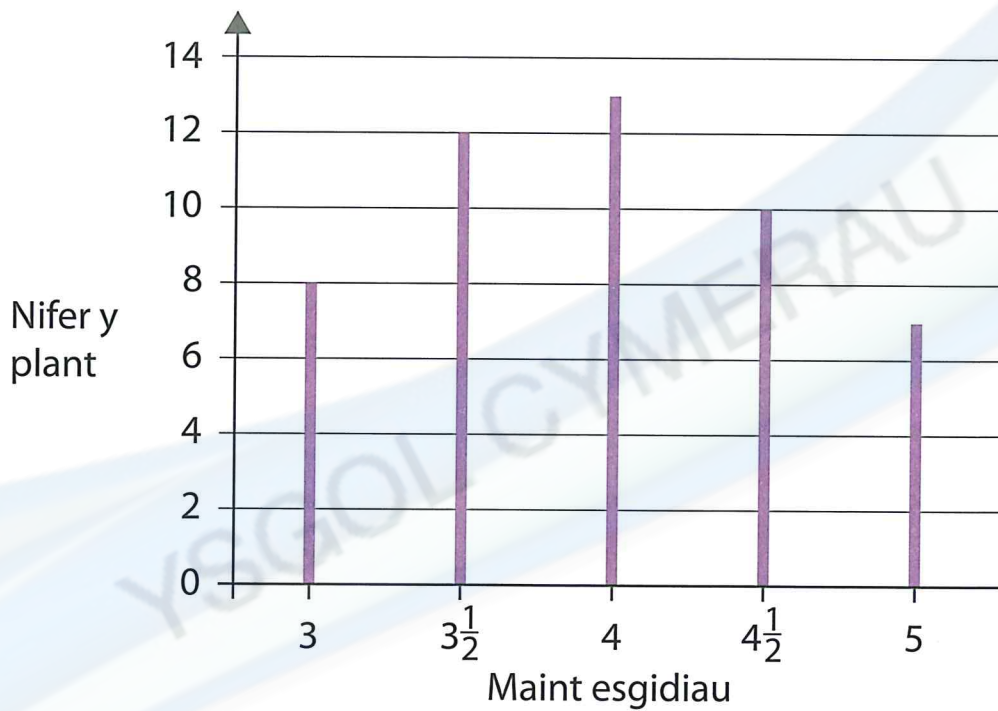
19

$$208 \div \boxed{} = 52$$

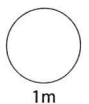


20

Maint esgidiau plant mewn clwb



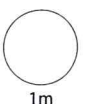
Faint o'r plant sydd ag esgidiau maint 4 neu fwy?




Beth yw **amrediad** maint esgidiau'r plant?

Rhowch gylch o amgylch yr ateb cywir.

- 2 3 5 6



21



Cost

3 phecyn am £8.25

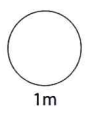
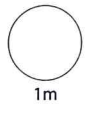
Faint mae 9 pecyn o'r papur hwn yn ei gostio?

£



22 Ysgrifennwch y rhifau sydd ar goll yn y tabl.

| Ffracsiwn | Degolyn |
|---------------|---------|
| $\frac{1}{2}$ | 0.5 |
| | 0.25 |
| $\frac{3}{4}$ | |
| | 0.1 |

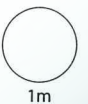


23 Mae Maryam yn meddwl am rif.

Mae hi'n dyblu'r rhif, yna'n tynnu 3

Yr ateb yw 57

Beth oedd ei rhif?



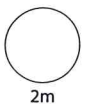
24



Mae 4 ffrind yn prynu tocynnau ar gyfer sioe.

Cyfanswm y gost yw £72

Beth yw cost 5 tocyn?



CYFANSWM



YSGOL CYMERAU