

# GWEITHDREFNOL

## 5CG16

Enw cyntaf \_\_\_\_\_

Cyfenw \_\_\_\_\_

Ysgol \_\_\_\_\_

Dosbarth \_\_\_\_\_


Dyddiad geni      ○○    ○○    ○○○○

Dyddiad y prawf    ○○    05    2016

Cyfanswm y sgôr  (uchafswm 35)



139112

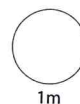
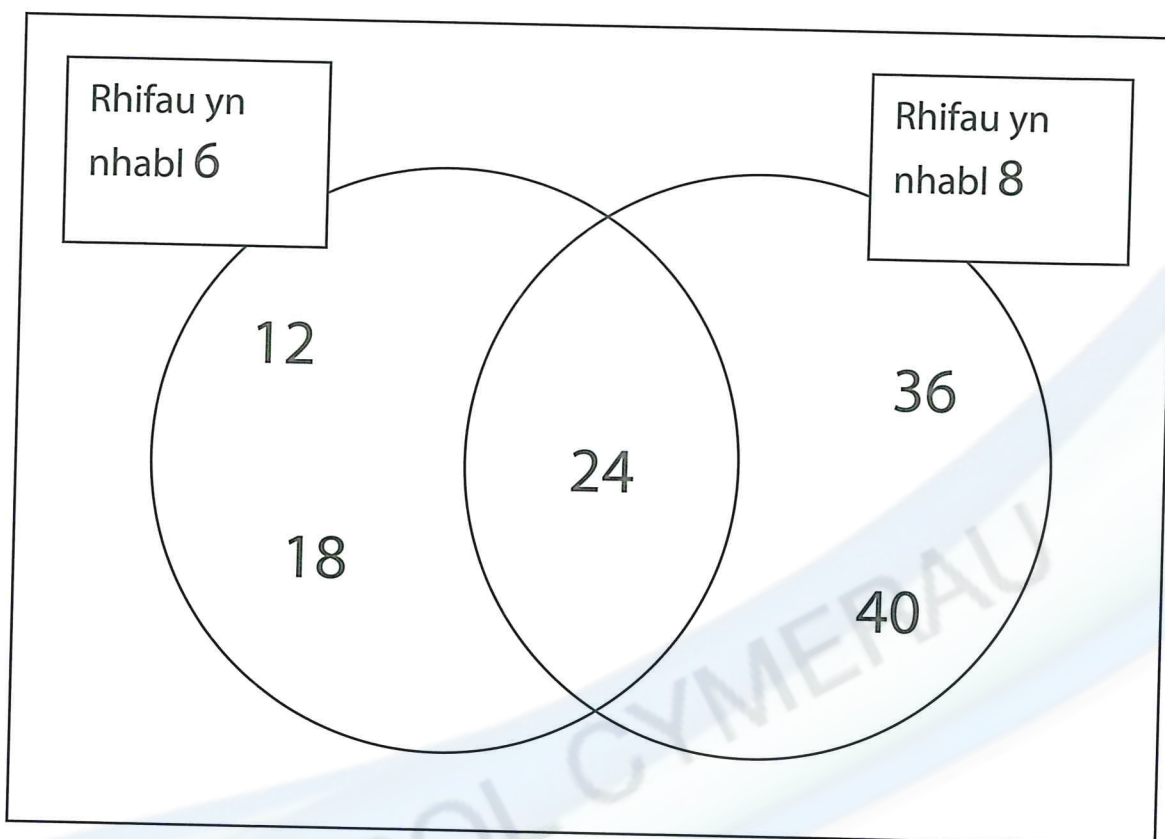


Llywodraeth Cymru  
Welsh Government



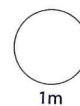
4 Pa rif sydd yn y lle **anghywir** ar y diagram Venn?

Rhowch gylch o amgylch eich ateb.



5

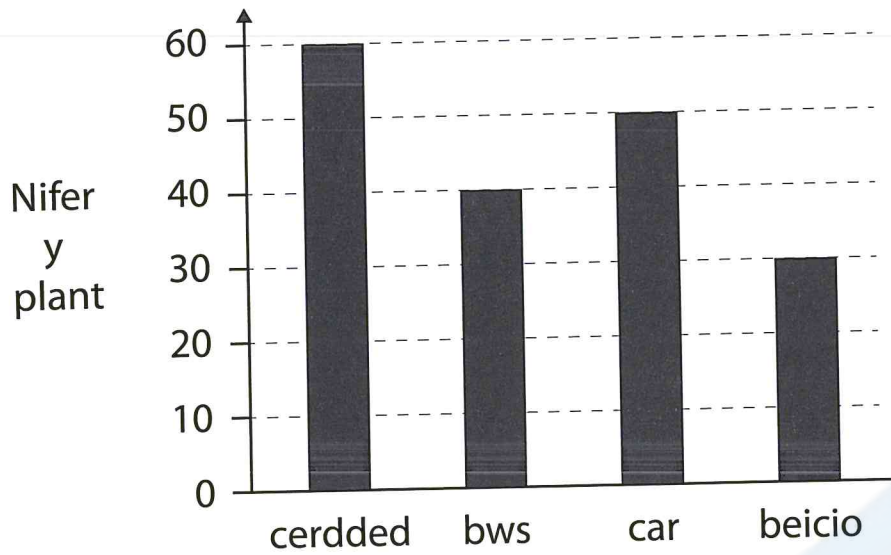
$$\frac{1}{2} \text{ cilogram} = \boxed{\text{gram}}$$





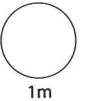
6

### Sut mae plant yn teithio i'r ysgol



Faint **yn fwy** o blant sy'n teithio mewn **car** nag sy'n **beicio**?

yn fwy



Pa **ffracsiwn** o blant sy'n cerdded i'r ysgol?

Rhowch gylch o amgylch eich ateb.

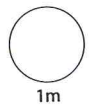
$\frac{1}{4}$

$\frac{1}{2}$

$\frac{2}{3}$

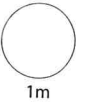
$\frac{1}{3}$

$\frac{1}{6}$



7

$$100 \div 5 = \boxed{\phantom{000}} \times 10$$



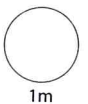
8



**2 dun o ffa pob  
am £1.25**

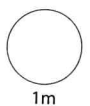
Mae Mrs Patel yn prynu 6 thun o ffa pob.  
Faint mae hi'n ei dalu?

£



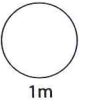
Mae hi'n talu gyda phapur £20  
Faint o newid ddylai hi ei gael?

£



9

Dwbl 25 = Hanner



1m

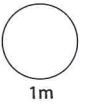
10



Mae'r tymheredd yn Abertawe yn  $3^{\circ}\text{C}$ .

Yng Nghorwen mae hi  $7^{\circ}\text{C}$  yn oerach.

Beth yw'r tymheredd yng Nghorwen?

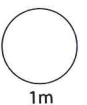
  $^{\circ}\text{C}$ 

1m

11 Mae trip i 10 o bobl yn costio £456

Maen nhw'n rhannu'r gost yn gyfartal.

Faint yw'r gost ar gyfer pob person?

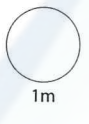
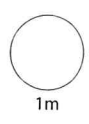
 £

1m

12

$$823 + 598 = \boxed{\phantom{0000}}$$

$$823 - 598 = \boxed{\phantom{0000}}$$



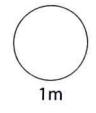
13

	Teithio o: Rosslare (Iwerddon)
	Teithio i: Penfro (Cymru)

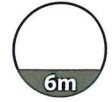
Fferi

Mae'r fferi'n gadael am 15 : 30 ac yn cymryd 3 awr a 55 munud.

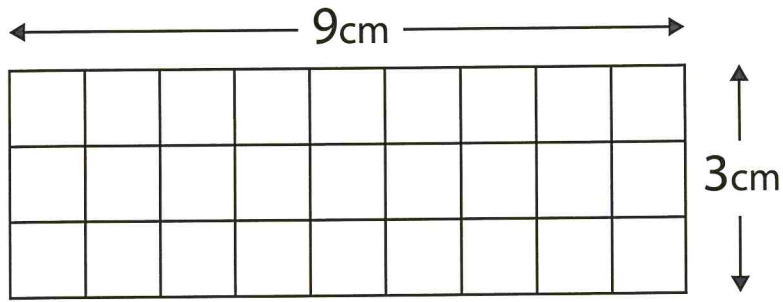
Faint o'r gloch mae'n cyrraedd Penfro?



CYFANSWM

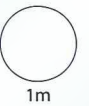


14



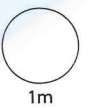
Beth yw **perimeddr** y petryal hwn?

cm



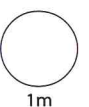
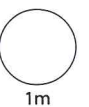
Beth yw **arwynebedd** y petryal?

cm<sup>2</sup>



15 Llenwch y bylchau yn y tabl.

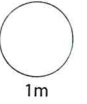
Ffracsiwn	=	Degolyn
$\frac{1}{4}$	=	
	=	0.3





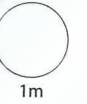
16

$$258 \div 6 = \boxed{\phantom{000}}$$



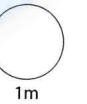
Ysgrifennwch gyfrifiad i wirio eich ateb.

$$\boxed{\phantom{000}} \times \boxed{\phantom{000}} = \boxed{\phantom{000}}$$



17


$$1250 \text{ millitr} = \boxed{\phantom{000}} \text{ litr}$$



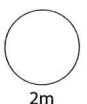
18 Mae 72 o blant mewn ysgol.

Mae  $\frac{5}{8}$  o'r plant yn fechgyn.

Faint o fechgyn sydd yn yr ysgol?



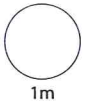
o fechgyn



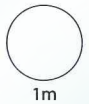
CYFANSWM



19 Ysgrifennwch y rhif sydd 100 yn llai na 100 000



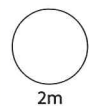
20 Beth yw'r gwahaniaeth rhwng 15.5 ac 13.8?



21 Mae 8 bar o siocled yn costio £7.20  
Faint mae 12 bar o siocled yn ei gostio?



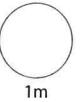
YSGOL DYMERAU



22

$$\div 100 = 13.7$$

$$\times 100 = 25$$



1m



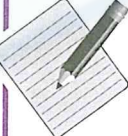
1m

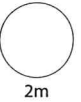
23

**Sgoriau mewn prawf**

Ben	13
Nor	6
Ifan	14
Bryn	9
Sian	8

Beth yw **cymedr** y sgoriau?





2m

CYFANSWM



8m

YSGOL CYMERAU

© Hawlfraint y Goron 2016