

# GWEITHDREFNOL

## 5CG15

Enw cyntaf \_\_\_\_\_

Cyfenw \_\_\_\_\_

Ysgol \_\_\_\_\_

Dosbarth \_\_\_\_\_

Dyddiad geni      ○○    ○○    ○○○○

Dyddiad y prawf    ○○    (05)    (2015)

Cyfanswm y sgôr  (uchafswm 35)



128922



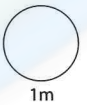
Llywodraeth Cymru  
Welsh Government

1

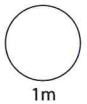
### Chwaraeon y mae plant yn eu chwarae

	Jo	Tom	Ceri	Ben	Liz	Will
pêl-droed	✓	✓	✓			✓
rygbi	✓		✓		✓	
nofio		✓		✓		✓
karate		✓			✓	✓
athletau		✓	✓			✓

Pwy sy'n chwarae rygbi **ac** yn gwneud karate?

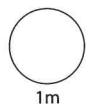


Faint o blant sy'n chwarae **4** o chwaraeon?



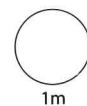
2

Ysgrifennwch y rhif sydd **hanner ffordd** rhwng 20 ac 80

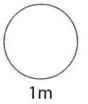


3

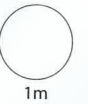
$890 + 110 =$



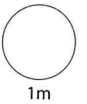

4 Talgrynnwch 7362 i'r **fil** agosaf.



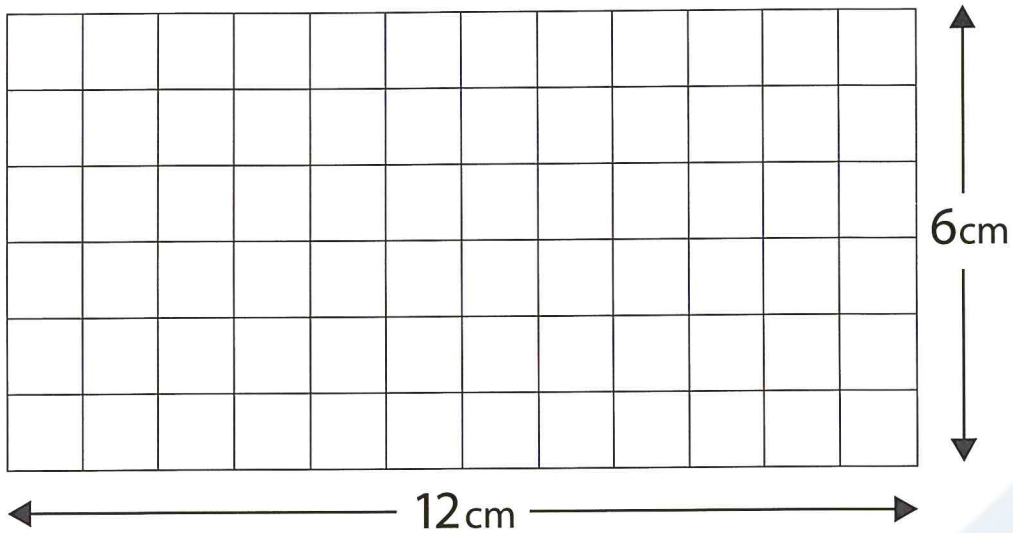
Talgrynnwch 7362 i'r **cant** agosaf.



5 At ba dymheredd mae'r saeth yn pwyntio?



6



Beth yw **arwynebedd** y petryal?

1m

Mae'r petryal yn cael ei dorri yn ei **hanner** i wneud dau sgwâr.

Beth yw **perimedr** un o'r sgwariau hyn?

1m

7

Ysgrifennwch  $\frac{1}{5}$  ar ffurf degolyn.

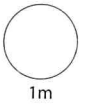
1m

Ysgrifennwch 0.7 ar ffurf ffracsiwn.

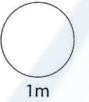
1m

8

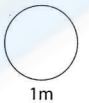
$274 + 241 =$



$431 - 269 =$



9 Beth yw'r **gwahaniaeth** rhwng 9.1 a 6.7?



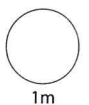
10 Yr un atebion sydd i'r cyfrifiadau hyn.

$16 \div 4$

$8 \div 2$

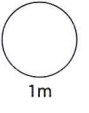
Ysgrifennwch rifau er mwyn i'r cyfrifiadau isod roi'r un ateb.

$36 \div 6$



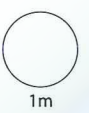
11

$$4 \times 187 = \boxed{\phantom{0000}}$$



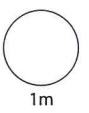
Ysgrifennwch gyfrifiad i wirio eich ateb.

$$\boxed{\phantom{0000}} \div \boxed{\phantom{0000}} = \boxed{\phantom{0000}}$$

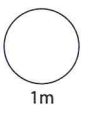


12

$$\frac{3}{8} \circ 16 = \boxed{\phantom{0000}}$$



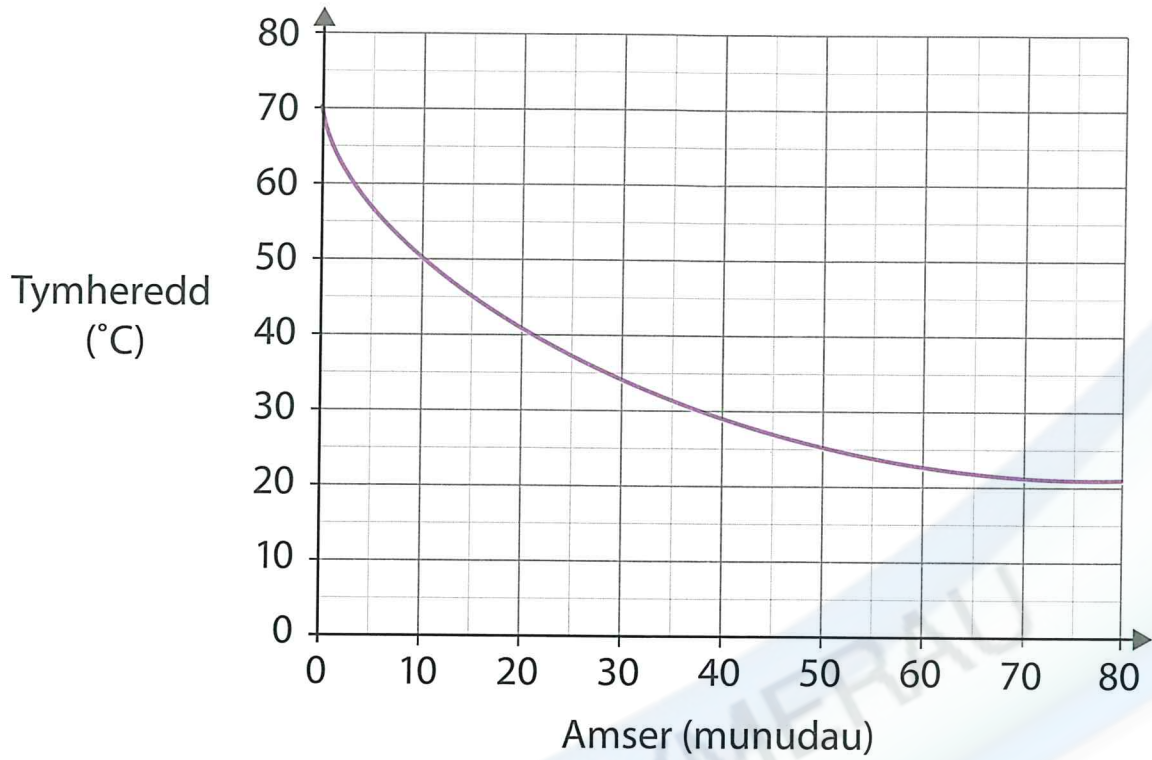
$$\frac{5}{8} \circ 16 = \boxed{\phantom{0000}}$$



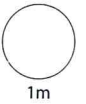
YSGOL CYMERAU

13

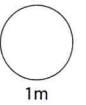
### Yr amser mae'n ei gymryd i hylif oeri



Beth yw'r tymheredd ar ôl 15 munud?

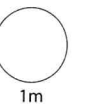


Faint o amser gymerodd hi i'r hylif oeri i 50°C?



14 Mae 320 o orennau'n cael eu rhannu'n gyfartal rhwng 5 bocs.

Faint o orennau sydd ym mhob boc?



15 Rhowch gylch o amgylch y **ddau** rif sy'n **llai** na  $\frac{1}{2}$

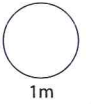
0.35

0.7

0.2

0.6

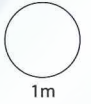
0.75



1m

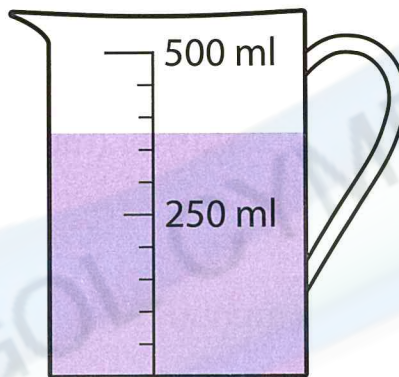
16

13.25cm =  mm



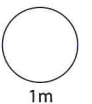
1m

17



Faint o ddŵr sydd yn y jwg?

ml



1m

Mae  $\frac{3}{4}$  litr o ddŵr mewn jwg arall.

Faint o **fililitrau** yw hyn?

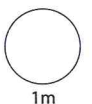
Rhowch gylch o amgylch yr ateb cywir.

75ml

750ml

7500ml

75000ml

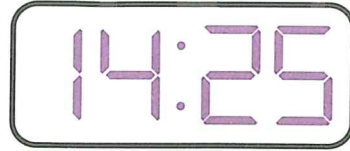


1m

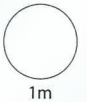


18

Dyma'r amser sy'n cael ei ddangos ar gloc:

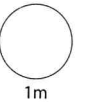


Beth oedd yr amser ar y cloc 30 munud yn gynharach?



1m


Ysgrifennwch yr amser sy'n cael ei ddangos ar y cloc  
 $1\frac{1}{4}$  awr ar ôl 14:25



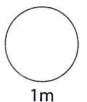
1m

19

Mae'r siâp hwn wedi ei wneud o giwbiau centimetr.



Beth yw **cyfaint** y siâp?




1m

CYFANSWM




7m


20



£4.75



£3.75



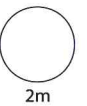
£7.50

Mae Ben yn arbed arian drwy brynu'r 3 llyfr hyn mewn sêl.

Mae'n talu cyfanswm o £12.50

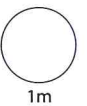
Faint o arian mae Ben wedi'i arbed?

YSGOL CYMERAU




21

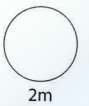
$$\div 100 = 35.6$$



- 22 Mae 12 pensil yn costio £5.40  
Faint fyddai 4 pensil yn ei gostio?



£

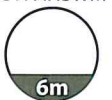
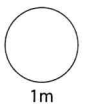


- 23 Yr arian mae banc yn ei dalu fel llog ar gynilion

Mae cynilo £100 am flwyddyn yn rhoi £3 i chi.

Mae cynilo £200 am flwyddyn yn rhoi £6 i chi.

Mae cynilo £700 am flwyddyn yn rhoi £ i chi.



YSGOL CYMERAU

© Hawlfraint y Goron 2015