

GWEITHDREFNOL

5CG14

Enw cyntaf _____

Cyfenw _____

Ysgol _____

Dosbarth _____

Dyddiad geni

○ ○ ○ ○ ○ ○ ○ ○

Dyddiad y prawf

○ ○ 0 5 2 0 1 4

Cyfanswm y sgôr

○

(uchafswm 35)



117568

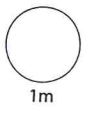


Llywodraeth Cymru
Welsh Government

1

Hanner 600 =

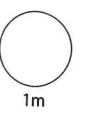
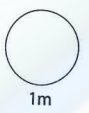
Dwbl 260 =



2

$\frac{1}{2}$ m = cm

$\frac{1}{2}$ cm = mm



3 Rhowch gylch o amgylch pob rhif sydd yn nhabl 4

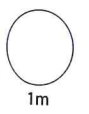
34

16

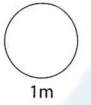
24

36

18



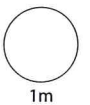
4 Ysgrifennwch y rhif sydd 10 yn llai na 1000



5

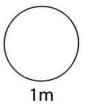


Pa gyflymder sy'n cael ei ddangos?

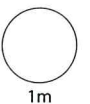


6

$$375 + 207 =$$



$$509 - 278 =$$



CYFANSWM



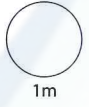
7 Ysgrifennwch y rhain yn eu trefn.

1.6 1.46 1.06 1.4

--	--	--	--

y lleiaf

y mwyaf

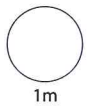
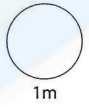


8

$$725 \div 5 = \boxed{}$$

Ysgrifennwch gyfrifiad i wirio eich ateb.

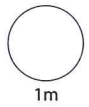
$$\boxed{} \times \boxed{} = \boxed{}$$



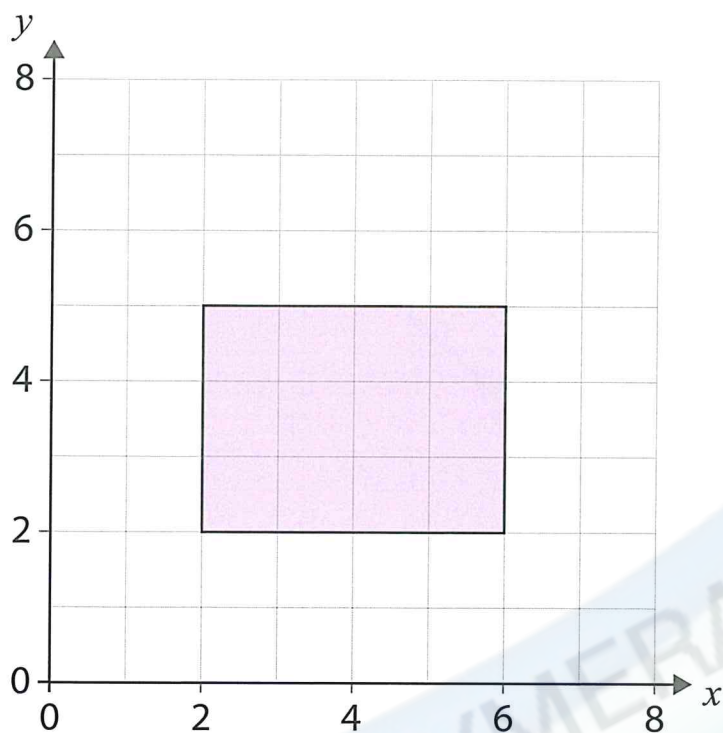
9 Cymerodd Alun 4 munud ac 15 eiliad i redeg ras.

Cymerodd Cerys 20 eiliad **yn llai** nag Alun.

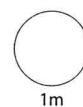
Cymerodd Cerys munud a eiliad.



- 10 Mae'r petryal sydd wedi'i liwio yn 4cm o hyd ac yn 3cm o uchder.



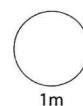
Beth yw **arwynebedd** y petryal?



Mae gan y petryal bedwar fertig.

Dau o'r rhain yw (2, 2) a (6, 5).

Beth yw cyfesurynnau'r ddau fertig arall?

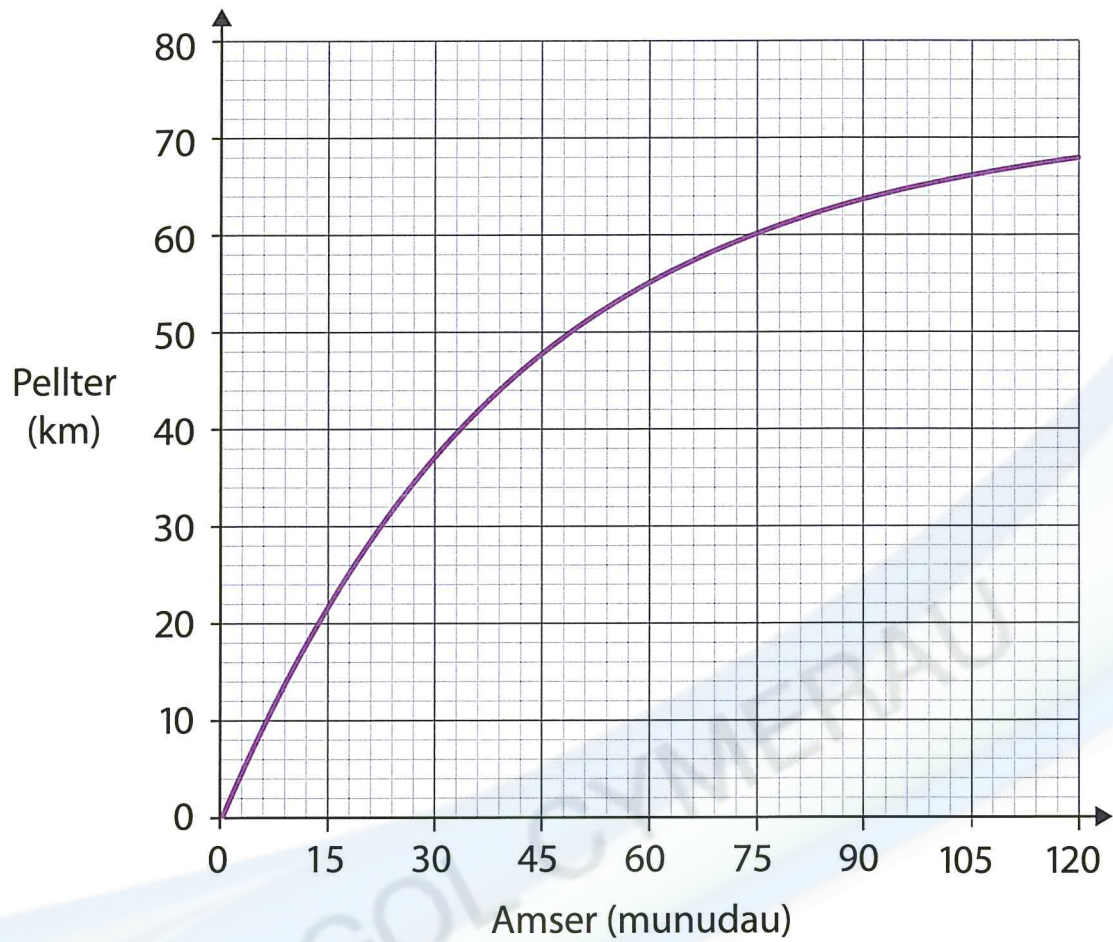


CYFANSWM



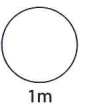
11

Yr amser mae taith car yn ei gymryd



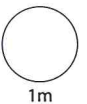
Faint o funudau gymerodd hi i'r car deithio'r 60km cyntaf?

o funudau



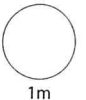
Faint o gilometrau wnaeth y car deithio yn yr awr gyntaf?

km



12

Ysgrifennwch $\frac{1}{4}$ fel degolyn.

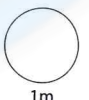
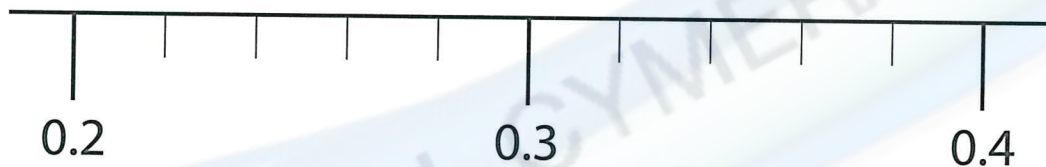


Ysgrifennwch 0.3 fel ffracsiwn.



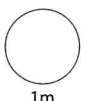
13

Tynnwch lun saeth (↓) sy'n pwyntio at 0.29



14

$$\frac{3}{5} \text{ o } \text{£}20 = \text{£}$$



Mae gan Nia £20

Mae'n gwario £15

Pa ffracsiwn o'r £20 wnaeth Nia ei wario?

Rhowch gylch o amgylch eich ateb.

$\frac{1}{2}$

$\frac{2}{5}$

$\frac{2}{3}$

$\frac{3}{4}$



CYFANSWM




15

Hoff lyfrau disgyblion Ysgol Iau y Llan

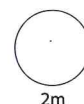
	Blwyddyn 4	Blwyddyn 5	Blwyddyn 6
ffuglen	29	32	27
hanes	26	28	31
gwyddoniaeth	30	28	33

Dewisodd mwy o ddisgyblion **wyddoniaeth** na **hanes**.

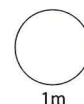
Faint yn fwy?



yn fwy



2m



1m

16

Degfed ran o 5000 =

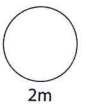
17



Mae Jon yn prynu 1 ddiod a 2 gacen.

Mae'n talu gyda phapur £10

Faint o newid mae Jon yn ei gael?

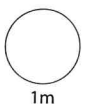


18 Mae 144 o hoelion mewn 1 pecyn.



Faint o hoelion sydd mewn 3 phecyn?

o hoelion



19

Y ddrama yn dechrau

19:40

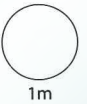
Y ddrama yn gorffen

22:10

Pa mor hir mae'r ddrama yn para?

awr a

munud.



20

Hyd chwilod:

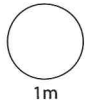
Buwch goch gota,

8mm


Goliath, 114mm



Talgrynnwch i'r 10mm agosaf.



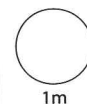
Hyd y chwilen hirgorn = 14.6cm



Hyd chwilen y dom = 2.9cm



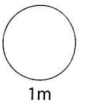
Y gwahaniaeth rhwng eu hyd =

 cm

21


$$\square \times 10 = 23$$

$$410 \div 100 = \square$$



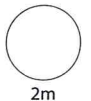
22 8 bag o greision am £3.20

Faint mae 6 bag o greision yn ei gostio?



YSGOL CYMERAU

£



YSGOL CYMERAU