

RHIFEDD

5CG13

Enw cyntaf _____

Cyfenw _____

Ysgol _____

Dosbarth _____

Dyddiad geni ○○ ○○ ○○○○

Dyddiad y prawf ○○ 05 2013

Sgôr cyfanswm (uchafswm 35)

Profion Rhifedd Cenedlaethol




Llywodraeth Cymru
Welsh Government

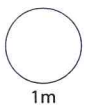
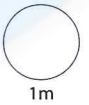
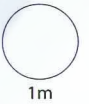
1 Cardiau rhif:



Defnyddiwch bob un o'r tri i wneud y rhif **lleiaf** posibl.



Defnyddiwch bob un o'r tri i wneud yr **odrif mwyaf** posibl.

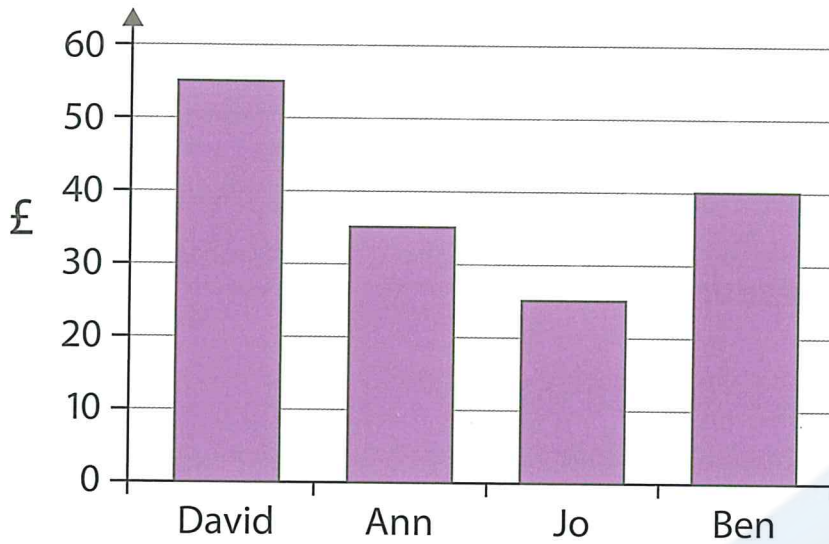


2

$$1000 - \boxed{} = 600$$

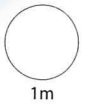
3

Arian a gasglwyd i elusen



Faint o arian mae Ann wedi'i gasglu?

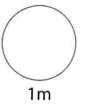
£



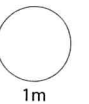
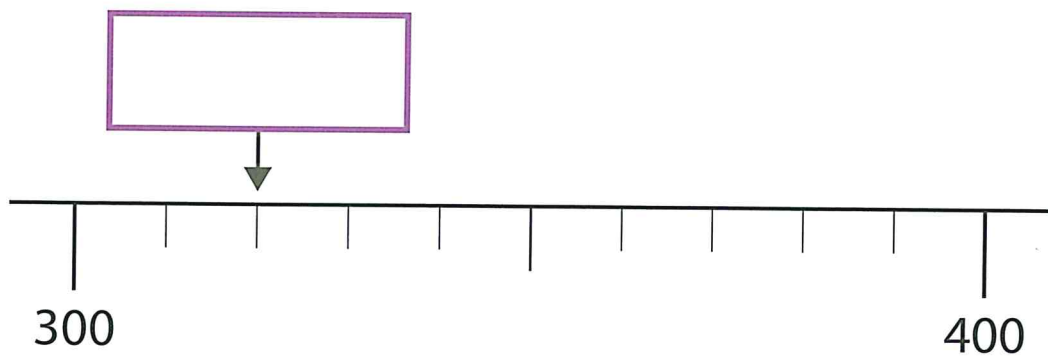
Mae Ben am gasglu £125

Faint **yn rhagor** o arian sydd ei angen arno?

£



4 At ba rif mae'r saeth yn pwyntio?



5



DVDs £3.50 yr un

Mae Leon yn prynu **tri** DVD.

Mae'n talu â phapur £20

Faint o newid mae Leon yn ei gael?



2m

6

$326 + 295 =$

1m

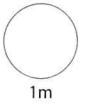
$471 - 208 =$

1m

7

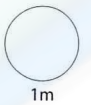
$$5 \times \square - 3 = 27$$

$$3 \times \square + 3 = 27$$



8

$$5 \times 129 = \square$$



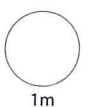
YSGOL CYMERAU



9 Mae 400 gram o bys yn costio 48c.

Faint mae pob 100 gram yn ei gostio?

c

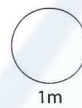


10 Ysgrifennwch y rhifau hyn yn eu trefn.

2.7 2.07 2.71 2.2

y lleiaf

y mwyaf

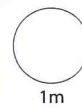


1m



11

$324 \div 6 =$

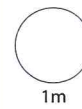


1m

Ysgrifennwch frawddeg rif i wirio eich ateb.

×

=

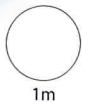


1m

12 Amserlen trenau:

Abertawe	05:58	06:28	06:58	07:28
Castell-nedd	06:10	06:40	07:10	07:40
Port Talbot	06:18	06:48	07:18	07:48
Pen-y-bont ar Ogwr	06:30	07:00	07:30	08:00
Caerdydd	06:55	07:25	07:55	08:25

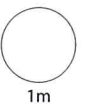
Mae trên **06:10** o **Gastell-nedd** yn cyrraedd **Pen-y-bont ar Ogwr** am



Mae Jen yn byw yn **Abertawe**.

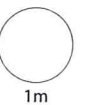
Rhaid iddi gyrraedd **Caerdydd** cyn **8** o'r gloch.

Faint o'r gloch mae'r trên hwyraf y gall ei ddal o **Abertawe**?



13

$\frac{1}{4}$ metr = centimetr



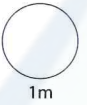
14

Ffilm: Yn dechrau 14 : 25

Yn para am 1 awr 45 munud

Yn gorffen

:



1m

15

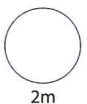
Mae Ella'n chwarae 70 o gemau cyfrifiadur.

Mae'n ennill $\frac{5}{7}$ o'r gemau.

Faint o gemau mae Ella yn eu hennill?



gêm



2m

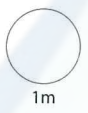
16 Uchder mynyddoedd:

Everest
8848 metr

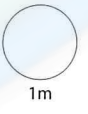
Yr Wyddfa
1085 metr



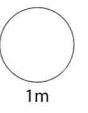
Talgrynnwch uchder y ddau
fynydd i'r **cant** o fetrau agosaf.



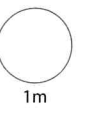
Amcangyfrifwch faint yn fwy yw Everest na'r Wyddfa.

 metr

17 Ysgrifennwch $\frac{1}{10}$ fel degolyn.

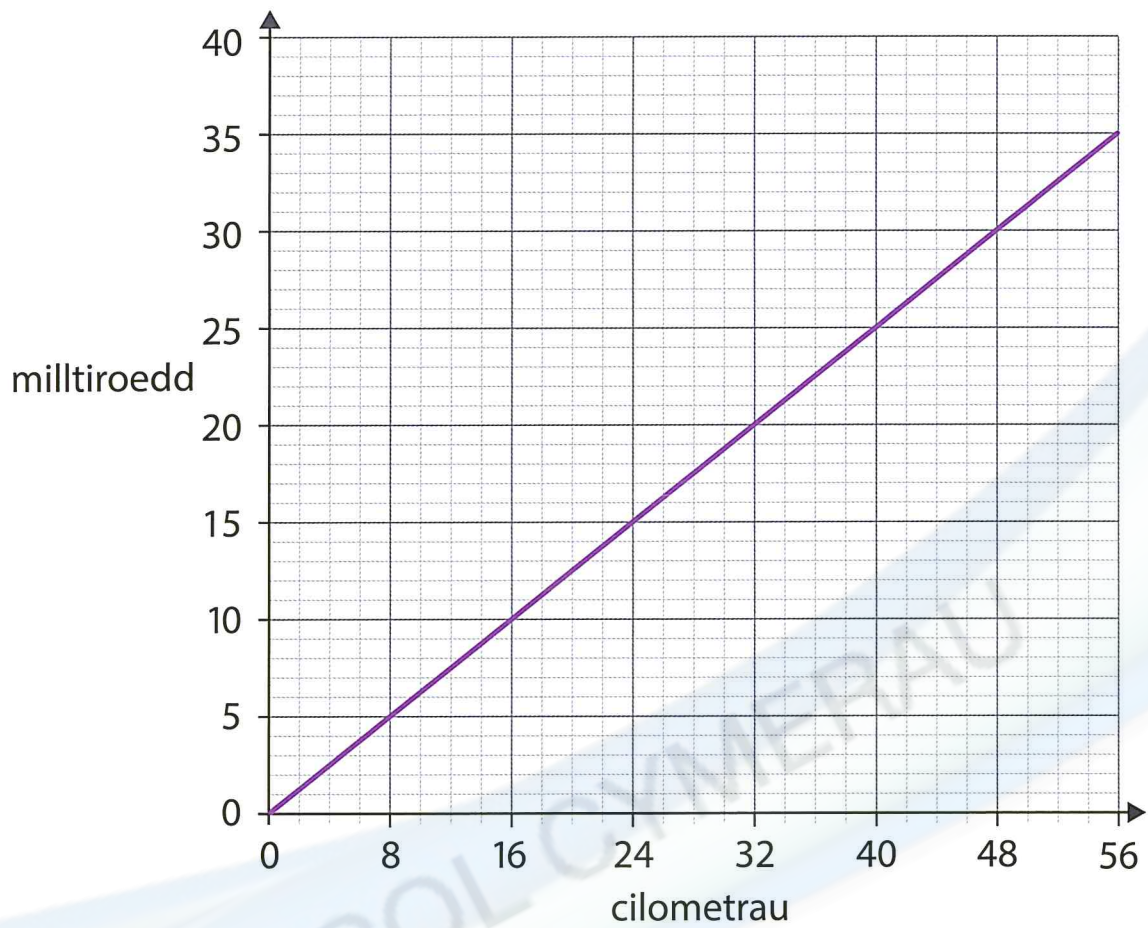


Ysgrifennwch 0.75 fel ffracsiwn.



18

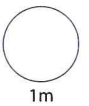
Newid rhwng cilometrau a milltiroedd



Mae'r graff yn dangos bod:

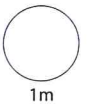
40 cilometr tua'r un faint â

milltir



22.5 milltir tua'r un faint â

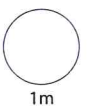
cilometr



Mae'r graff yn dangos bod 10 milltir tua'r un faint ag 16 cilometr.

Mae hyn yn golygu bod 100 milltir
tua'r un faint â

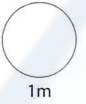
cilometr



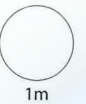
19 Tymheredd yn ystod y dydd: 12°C

Tymheredd yn ystod y nos: -3°C

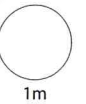
Gwahaniaeth = $^{\circ}\text{C}$



20 $2.47 \times 100 =$




$32.6 \div 10 =$

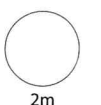


21 Mae 6kg o datws yn costio £11.94

Faint yw cost 2kg?



£



CYFANSWM



YSGOL CYMERAU