

# GWEITHDREFNOL

## 4CG18

Enw cyntaf \_\_\_\_\_

Cyfenw \_\_\_\_\_

Ysgol \_\_\_\_\_

Dosbarth \_\_\_\_\_

Dyddiad geni    ○○    ○○    ○○○○

Dyddiad y prawf    ○○    05    2018

Cyfanswm y sgôr  (uchafswm 35)



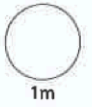
165072



Llywodraeth Cymru  
Welsh Government

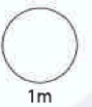
1 Rhowch gylch o amgylch **dau** rif sy'n **adïo** i wneud 33

13      15      17      18      19



Rhowch gylch o amgylch **dau** rif sy'n **lluosi** i wneud 24

4      5      6      7      8

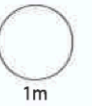


2 Mae gan Alwen £8.30

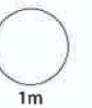
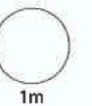
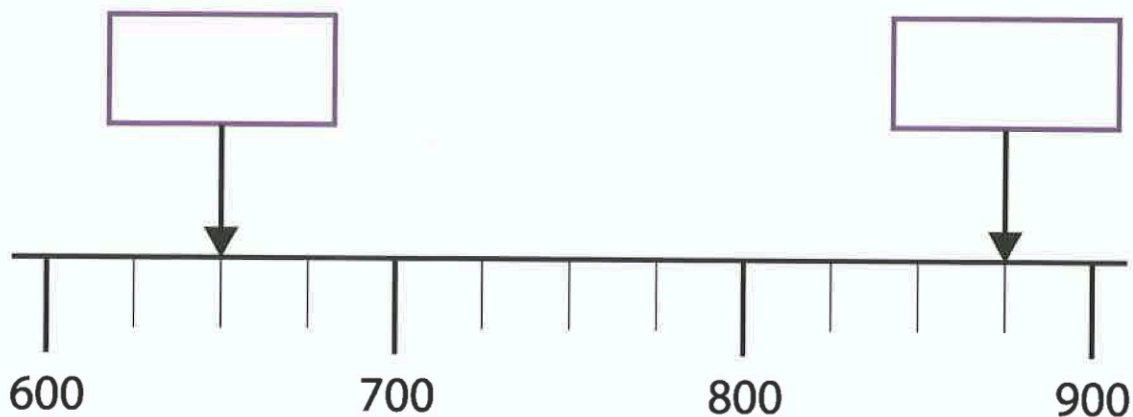
Mae'n gwario **hanner** yr arian.

Faint mae hi'n ei wario?

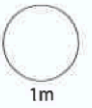
£



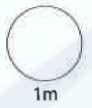
3 At ba rifau mae'r saethau'n pwyntio?



- 4 Mae 153 o bobl mewn sioe.  
Talgrynnwch y rhif hwn i'r 10 agosaf.



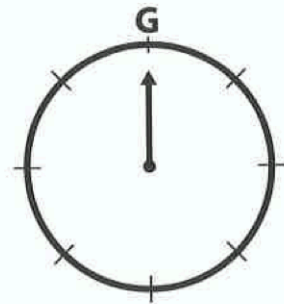
5  $196 + 45 =$



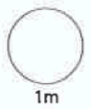
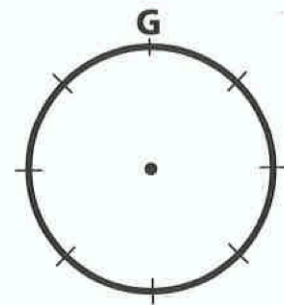
$237 - 39 =$



- 6 Mae'r saeth ar y cwmpawd yn pwyntio i'r **gogledd**.



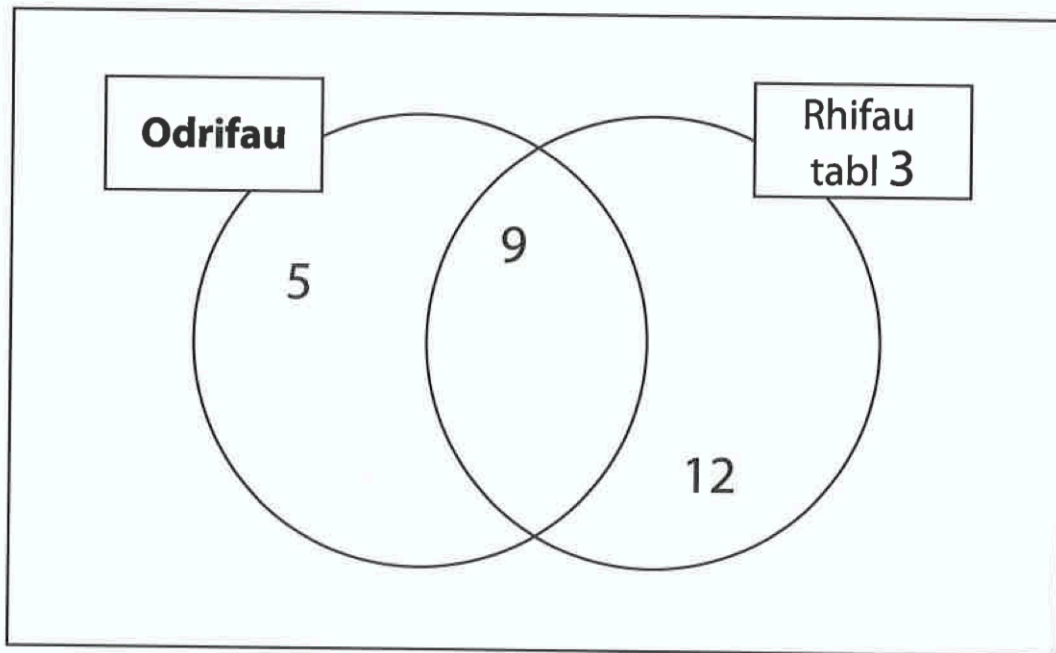
Tynnwch lun saeth sy'n pwyntio i'r **gorllewin**.



CYFANSWM



7



Ysgrifennwch 15 a 25 yn y lleoedd cywir ar y diagram Venn.



YSGOL CYMERAU

8 Mae Jess yn mesur blodyn.

Mae'r blodyn yn 40 centimetr o uchder.

Sawl milimetr yw hyn?

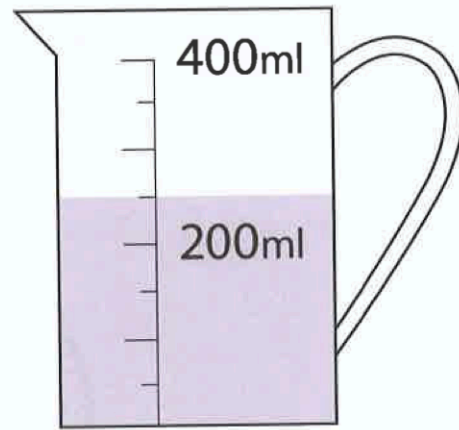


milimetr

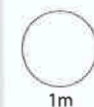
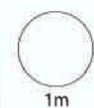
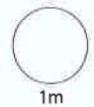
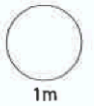


9

Mae gan Erin jwg o ddŵr.  
Faint o ddŵr sydd yn y jwg?

 ml

Mae'n defnyddio **hanner** y dŵr.  
Faint o ddŵr sydd ar ôl yn y jwg?

 ml

10

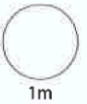

$$76 \div 4 =$$

$$76 \div$$

$$= 4$$

- 11 Mae Mrs Powell yn dechrau gwaith am **hanner awr wedi wyth** yn y **bore**.

Tynnwch lun y bysedd ar y cloc i ddangos yr amser hwn.

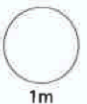


Mae Mrs Powell yn cyrraedd adref am **saith o'r gloch** yn y **nos**.

Ysgrifennwch yr amser hwn ar y cloc digidol 24 awr isod.

cloc 24 awr

⌚



- 12 Ysgrifennwch y rhain yn eu trefn.

3.3m

310cm

3m

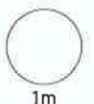
⌚

⌚

⌚




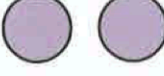
**y lleiaf**

**y mwyaf**



- 13 Mae athro yn gofyn i'r plant a ydyn nhw eisiau afal neu oren.  
Mae'r siart hwn yn dangos y canlyniadau.

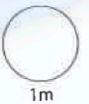
Allwedd  = 4 o blant

	Merched	Bechgyn
Eisiau afal		
Eisiau oren		

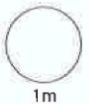
Faint o blant sydd eisiau oren?

Mae mwy o ferched nag o fechgyn eisiau afal.

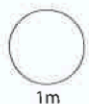
Faint yn fwy?



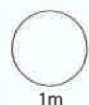
1m



1m



1m



1m

CYFANSWM



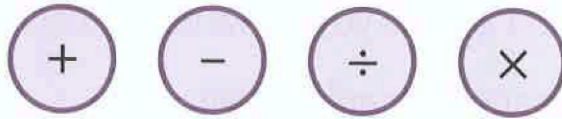
7m

14

$$3200 \div 10 = \boxed{\phantom{000}}$$

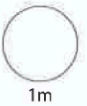
$$\boxed{\phantom{000}} \div 10 = 17$$

15



Dewiswch rai o'r symbolau hyn i gwblhau'r frawddeg rif.

12 ○ 6 ○ 3 = 5



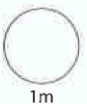
16

Dyma amserlen ar gyfer clwb gwyliau plant.

Dechrau	Grŵp A	Grŵp B	Grŵp C	Grŵp Ch
9:00	Celf	Drama	Gemau	Cerdd
10:35	Gemau	Celf	Cerdd	Drama
12:10	Amser cinio	Amser cinio	Amser cinio	Amser cinio
13:05	Cerdd	Gemau	Drama	Celf
14:40	Egwyl	Egwyl	Egwyl	Egwyl
14:55	Drama	Cerdd	Celf	Gemau
16:30	Adref	Adref	Adref	Adref

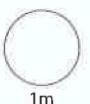
Pa grŵp sydd olaf i gael **Cerdd**?

Grŵp



Pa mor hir yw amser cinio?

munud





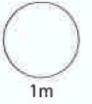
17

$\frac{1}{4}$


o

1000

=



18

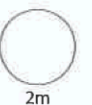


Heb ei lunio i faint llawn

**Perimedr** y petryal hwn yw 62cm.

Beth yw hyd y petryal?

cm



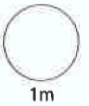
CYFANSWM



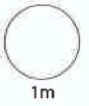
19

 $\frac{1}{6}$ 

o 30 =



o 12 = 4



20

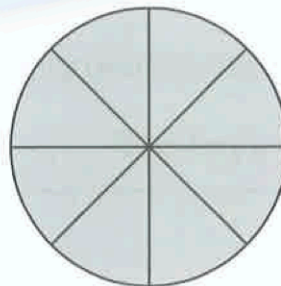
 $£5.64 - £3.47 =$ 

£

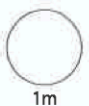
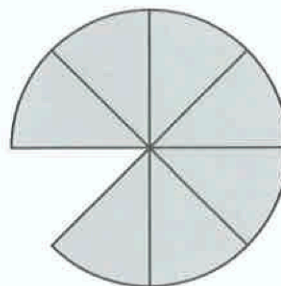


21

Mae wyth darn i gacen Scott.



Mae'n bwyta un darn.

Pa **ffracsiwn** o'r gacen sydd ar ôl?

22



diod  
75c




afal  
50c

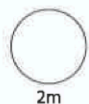
Mae Pavel yn gwario £8.50 ar ddiodydd ac afalau.

Mae'n prynu 5 afal.

Faint o ddiodydd mae'n eu prynu?



o ddiodydd



CYFANSWM





YSGOL CYMERAU