

GWEITHDREFNOL

4CG14

Enw cyntaf _____

Cyfenw _____

Ysgol _____

Dosbarth _____

Dyddiad geni ○○ ○○ ○○○○

Dyddiad y prawf ○○ 05 2014

Cyfanswm y sgôr (uchafswm 35)

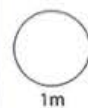
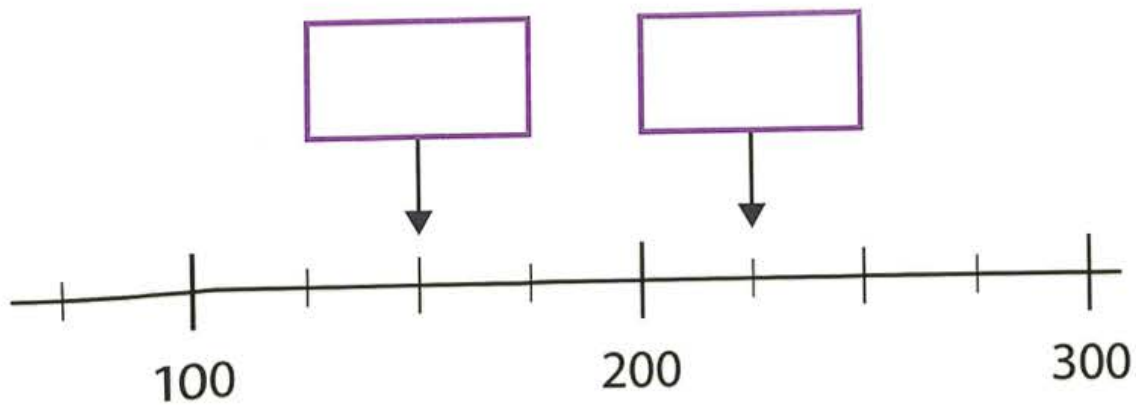


117567

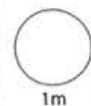


Llywodraeth Cymru
Welsh Government

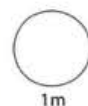
1 At ba rifau mae'r saethau'n pwyntio?



2 Talgrynnwch 138 i'r 10 agosaf.

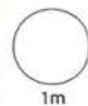


Talgrynnwch 138 i'r 100 agosaf.



3 Cyfrifwch yn ôl fesul deg.

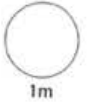
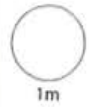
347 → 337 → 327 → 317 → →



4

$$341 + 76 = \boxed{}$$

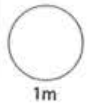
$$117 - 69 = \boxed{}$$



5

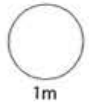

Mae Beth yn gadael ei chartref am **chwarter i un ar ddeg** yn y bore.

Ysgrifennwch yr amser hwn ar y cloc digidol isod.



Mae Beth yn cyrraedd gartref am 17:20

Rhowch fysedd ar y cloc i ddangos yr amser hwn.



6 Ysgrifennwch y gwerthoedd coll.



Yr un swm sy'n cael ei adio bob tro.


$$\boxed{\pounds} \rightarrow \pounds 2.40 \rightarrow \pounds 3.60 \rightarrow \pounds 4.80 \rightarrow \boxed{\pounds}$$

2m

7


Faint o hufen iâ gafodd ei werthu ar un penwythnos

Dydd Sadwrn	
Dydd Sul	

Allwedd:  = 6 hufen iâ

Cafodd **mw**y o hufen iâ ei werthu ddydd Sadwrn na dydd Sul.


Faint yn fwy?



yn fwy


2m

8

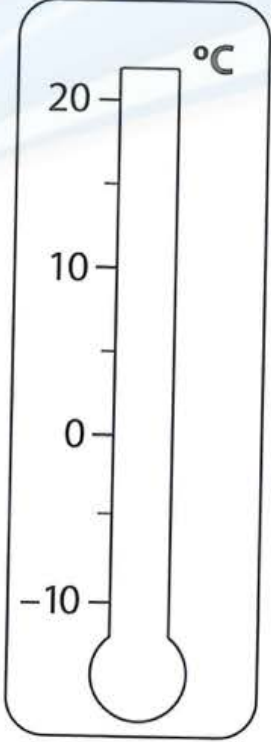


Y Trallwng

Beth yw'r tymheredd yn y Trallwng?

 °C


YSGOL CYMERAU



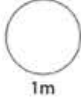
Oslo

Y tymheredd yn Oslo yw -5°C .

Dangoswch hwn ar thermomedr **Oslo**.

Mae'r tymheredd yn Oslo yn **cynyddu** 3°C .

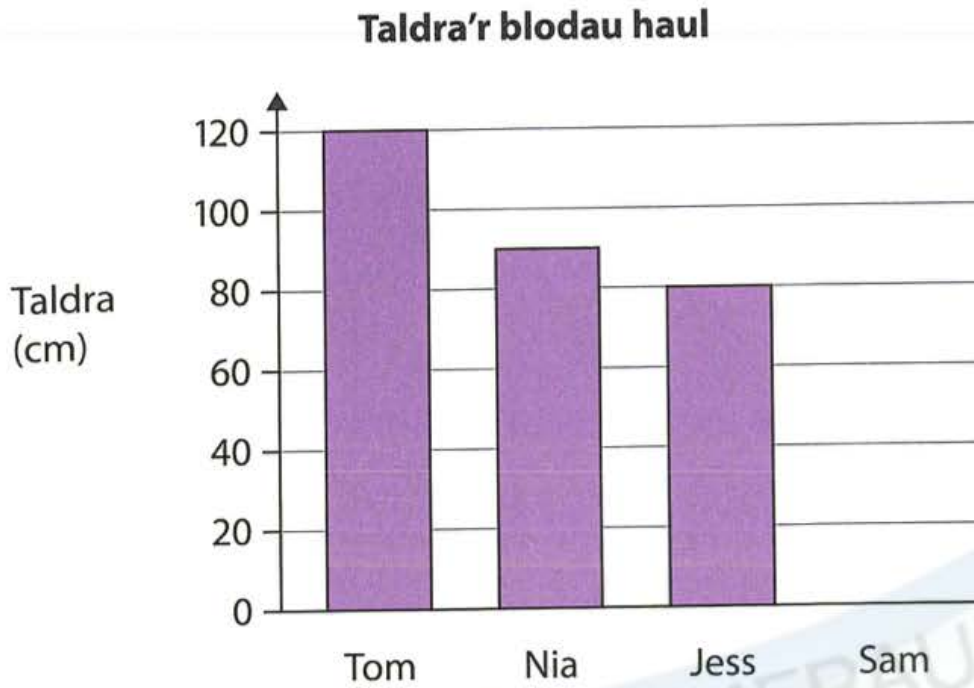
Ysgrifennwch y tymheredd newydd.

 °C


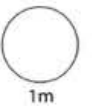
CYFANSWM



9 Mae'r plant hyn yn tyfu blodau haul.

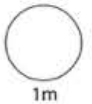


Pa mor dal yw blodyn haul **Nia**?

 cm

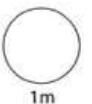
Mae blodyn haul **Sam** yn **100**cm o daldra.

Dangoswch hyn ar y siart bar.

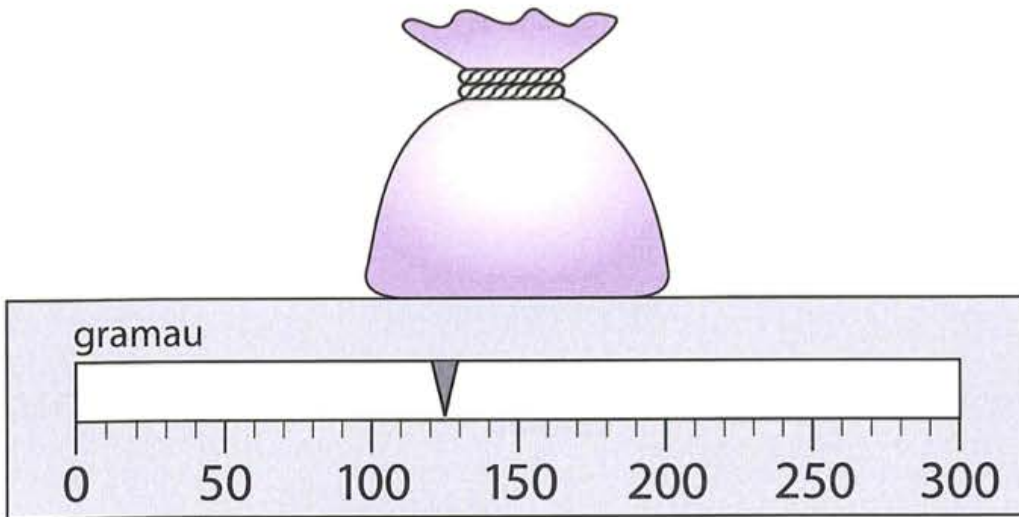


Mae Tom eisiau i'w flodyn haul fod yn $1\frac{1}{2}$ **metr** o daldra.

Faint o gentimetrau yn **fwy** mae'n rhaid i'r blodyn haul dyfu?


 cm

12



Faint mae'r bag yn ei bwysu?

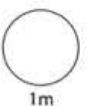
gram



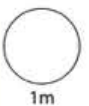
Mae'r 3 llyfr hyn yn pwyso 900 gram.

Faint mae 1 llyfr yn ei bwysu?

gram



13 Beth yw $\frac{1}{10}$ o 120?



- 14 Mae un bocs yn dal 6 wy.



Mae gan Alun 84 o wyau i'w rhoi mewn bocsys.

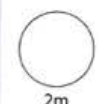
Faint o focsys sydd eu hangen arno?

o focsys



- 15 Didolwch 14, 17 a 20 i'r blychau cywir ar y diagram.

	rhifau sydd yn nhabl 2	rhifau sydd ddim yn nhabl 2
rhifau sydd yn nhabl 4		
rhifau sydd ddim yn nhabl 4		



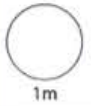
CYFANSWM



16

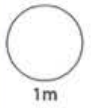
Dwbl 170

=



$3\frac{1}{2} \times 10$

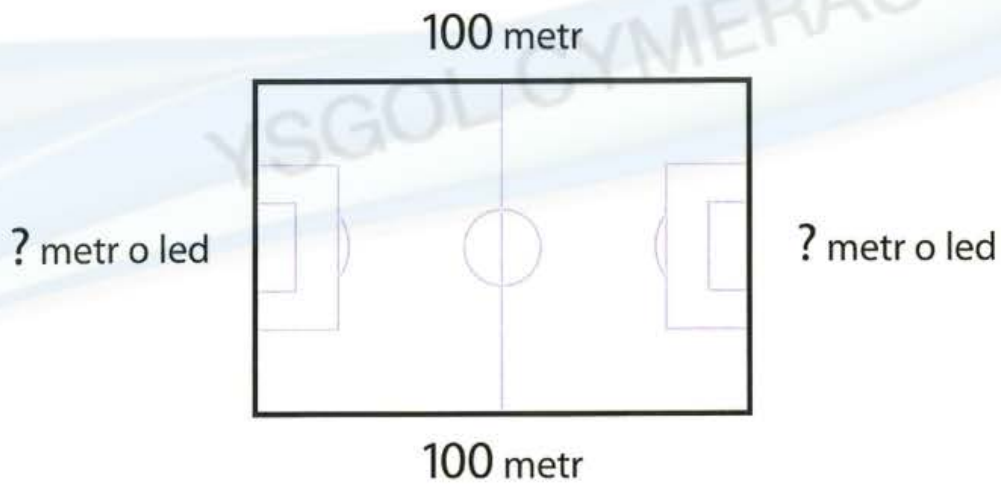
=



17

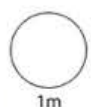
Petryal yw'r cae pêl-droed hwn.

Mae'n 100 metr o hyd.



Perimeddr y cae pêl-droed yw 320 metr.

Faint yw lled y cae?



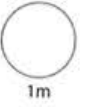
18

$\times 8 = 240$

$\div 5 = 90$



1m



1m

19



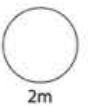
Un tun: 90c
 Cynnig arbennig:
dau dun am £1.45

Mae angen **dau** dun ar Ben.

Faint o arian mae'n ei arbed drwy brynu'r cynnig arbennig?



C



2m

CYFANSWM



7m

A decorative graphic consisting of several overlapping, wavy lines in shades of light blue and purple, flowing from the top left towards the bottom right. The text 'YSGOL CYMERAU' is printed in a light blue, sans-serif font across the middle of these waves.

YSGOL CYMERAU

© Hawlfraint y Goron 2014