

GWEITHDREFNOL

3CG17

Enw cyntaf _____

Cyfenw _____

Ysgol _____

Dosbarth _____

Dyddiad geni ○○ ○○ ○○○○

Dyddiad y prawf ○○ 05 2017

Cyfanswm y sgôr (uchafswm 30)



150236



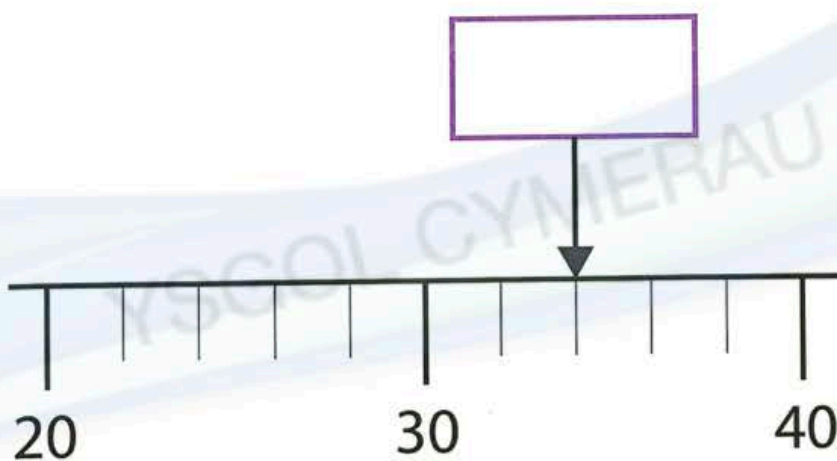
Llywodraeth Cymru
Welsh Government

1 Rhowch gyloch o amgylch **tri** rhif sy'n **adïo** i wneud **10**

7 2 8 1 3



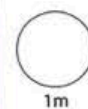
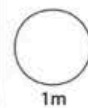
2 At ba rif mae'r saeth yn pwyntio?



3





Dwbl 22 =

Hanner 22 =




- 4 Mae plant Dosbarth 3 yn dewis eu hoff chwaraeon.

Canlyniadau

rygbi	
nofio	
pêl-droed	
rhedeg	

Allwedd:

 = 2 o blant

Faint o blant sy'n dewis **pêl-droed**?

o blant

Mae mwy o blant yn dewis **rygbi** na **rhedeg**.

Faint yn fwy?

yn fwy

1m

1m

5 Beth allai'r rhifau sydd ar goll fod?

$$15 + \square + \square = 20$$

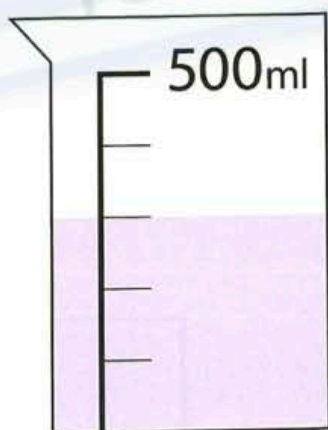


Nawr ysgrifennwch rifau **gwahanol**.

$$15 + \square + \square = 20$$




6



Faint o ddŵr sydd yn y jwg?

ml



7 $53 + 28 =$

$63 - 39 =$



8 $\frac{1}{5} \circ 30 =$

YSGOL CYMERAU

9 Mae 27 o beli mewn bag.

Mae 3 o blant yn eu rhannu'n gyfartal.

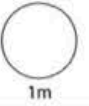
Faint o beli mae pob plentyn yn eu cael?



o beli

10

$$8 \times 4 = \square \times 8$$



11

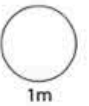
Mae gan Mrs Davies 18 o lyfrau yn ei siop.

Mae'n gwerthu 13 ohony n nhw.

Mae'n prynu 15 arall.

Faint o lyfrau sydd ganddi nawr?

YSGOL CYMERAU

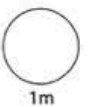


12

Mae gan Beth 72c.

Mae'n gwario hanner yr arian.

Faint mae hi'n ei wario?



13 Ysgrifennwch y symiau arian hyn yn eu trefn.

£7.42 740c £7.24 74c

y lleiaf

y mwyaf



1m

14

$10 \times 18 =$



1m

15 Edrychwch ar y cloc.

Faint o funudau sydd tan **3 o'r gloch**?



o funudau



1m

CYFANSWM



6m

16

Mae Dan yn cynilo	
wythnos 1	78c
wythnos 2	45c
wythnos 3	50c

Mae Dan yn cynilo i brynu tegan sy'n costio £1.99

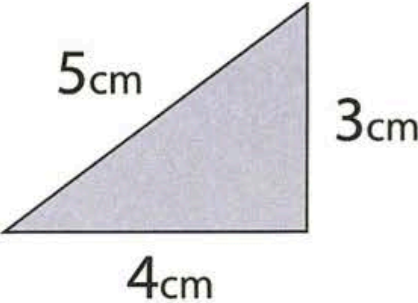
Faint **yn fwy** o arian sydd ei angen arno?



ceiniog yn fwy

2m

17

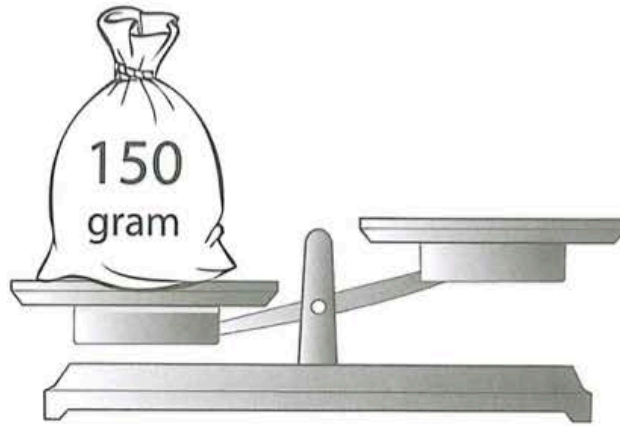


Beth yw **perimedr** y triongl hwn?

cm

1m

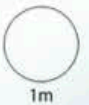
18



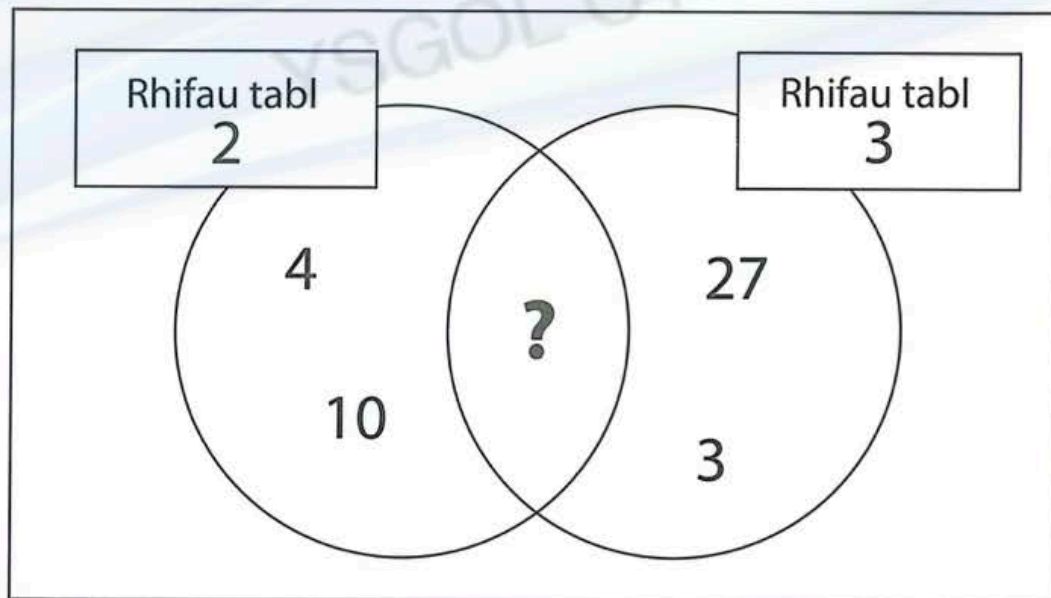
Mae David eisiau cydbwyso'r glorian.

Faint o bwysau 10 gram sydd eu hangen arno?

o bwysau

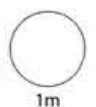



19



Gallai ? fod yn 6


Ysgrifennwch rif arall y gallai hwn fod.



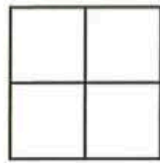
CYFANSWM



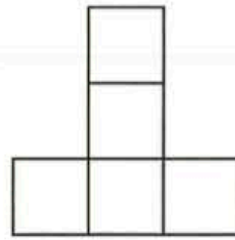
20 Dyma 5 siâp.




A



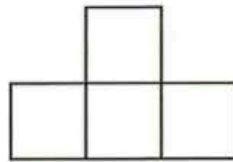
B



C



Ch



D

Mae gan siâp



a siâp



yr un arwynebedd.



1m

21 Mae **gwahaniaeth** o 10 rhwng dau rif.

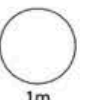
Un o'r rhifau yw 60

Beth allai'r rhif arall fod?



1m

Pa rif arall allai hwn fod?



1m

22 Hyd y sioe yw $1\frac{1}{2}$ awr.


Beth yw hyn mewn **munudau**?

o funudau



23

Mae 1 lolipop
yn costio 20c 


Mae 1 darn o losin
yn costio 5c 

Mae Lin yn prynu lolipops a losin.

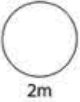
Mae'n talu £1.30 i gyd.

Mae'n prynu 4 lolipop.

Faint o **losin** mae hi'n eu prynu?



o losin



CYFANSWM



YSGOL CYMERAU