

# PROCEDURAL

## 3EP15

First name \_\_\_\_\_

Last name \_\_\_\_\_

School \_\_\_\_\_

Class \_\_\_\_\_

Date of birth ○○ ○○ ○○○○

Date of test ○○ 05 2015

Total score  (maximum 30)



128912



Llywodraeth Cymru  
Welsh Government

1 Circle **three** numbers that **add** to make 20

13      6      2      5      11



2 Write in order.

130      205      103      250

smallest

largest



3

$$19 - 14 + 15 =$$



4

### What children in Year 3 like to do best

	tally for girls	tally for boys
football	I	
read		
cycle		
swim		

5 girls and 3 boys choose **cycle**.

Show this on the tally chart.

More girls than boys choose **swim**.

How many more?

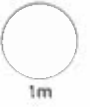
more girls




5

$$27 + 46 = \boxed{\phantom{000}}$$

$$54 - 29 = \boxed{\phantom{000}}$$




6



How heavy is the hamster?

grams



7 Join cards that have the **same** answer.

One is done for you.

$20 + 5$	$3 \times 3$
$20 - 11$	$5 \times 5$
$20 - 2$	$7 \times 4$
$20 + 8$	$8 \times 3$
	$9 \times 2$

A line connects the card  $20 + 5$  to the card  $5 \times 5$ .




2m




TOTAL

5m


8 Here are five shapes.




A



B



C



D



E

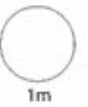
Which shape has the **greatest area**?

Write its letter.




Which two shapes have **equal areas**?

Write their letters.



9 Poppy leaves school at 3:20pm.

Draw the minute hand to show this time.



Poppy gets home at 3:35pm.

How many minutes **before 4 o'clock** is that?

 minutes

10 5 biscuits in a pack.

How many in 6 packs?

 biscuits

Mr James buys 45 of these biscuits.

How many packs does he buy?

 packs

TOTAL





- 11 Anna has 1 metre of ribbon.  
She cuts off 70cm.

How much ribbon is left?

  
cm

- Tom has 300cm of ribbon.  
He cuts it into 50cm strips.

How many strips does he have?

  
strips

- 12 Write these amounts of money in order.

£5.26

59p

£5.63

537p

smallest

largest





13 This book costs £7.00



Jack saves £1.50 a week to buy the book.

For how many weeks does he save?



YSGOL CYMERAU

2m

14

Double 26 =

26 × 10 =

1m

1m

TOTAL  
  
7m

15 Find  $\frac{1}{3}$  of 15



16 Write 183, 25 and 158 in the empty boxes.

$$\boxed{183} - \boxed{25} = \boxed{158}$$

so  $\boxed{\phantom{000}} + \boxed{\phantom{000}} = \boxed{\phantom{000}}$



Write 48, 4 and 12 in the empty boxes.

$$\boxed{48} \div \boxed{4} = \boxed{12}$$

so  $\boxed{\phantom{000}} \times \boxed{\phantom{000}} = \boxed{\phantom{000}}$



17

Potatoes



50p for 1 kilogram

Carrots



40p for 1 kilogram

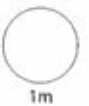
Sam buys  $1\frac{1}{2}$  kilograms of potatoes.

How much does he pay?

 p


Lily buys 2 kilograms of carrots with a £1 coin.


How much change does she get?

 p


Ben buys some carrots and potatoes for £1.70

He buys 1 kilogram of potatoes.

How many kilograms of carrots does he buy?



kilograms

