

# NUMERACY

# 2EP13

First name \_\_\_\_\_

Last name \_\_\_\_\_

School \_\_\_\_\_

Class \_\_\_\_\_

Date of birth ○○ ○○ ○○○○

Date of test ○○ 05 2013

Total score  (maximum 28)




National Numeracy Tests

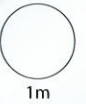


Llywodraeth Cymru  
Welsh Government

1



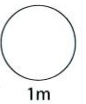
How many balls?



2

Count on in **twos**.

5 → 7 → 9 →  →  →



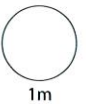
3

Write in order.





45      22      56      38

**smallest**

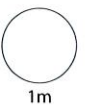
**largest**



4



How many pens altogether?

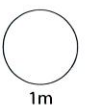
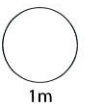
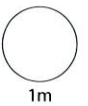


5

$70 + 3 =$

$30 + 30 =$

$40 + 50 =$





TOTAL



6

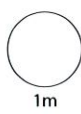
### How we come to school

	car 	walk 
<b>Monday</b>	6	15
<b>Tuesday</b>	4	17
<b>Wednesday</b>	9	12
<b>Thursday</b>	7	14
<b>Friday</b>	8	13

On **Tuesday**, how many come by car?




On which **day** do **13** walk?




7

$26 + 5 =$



$15 - 7 =$



8 Join each clock to the correct time.



quarter to 10



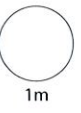
10 o'clock




quarter past 10



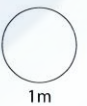
half past 10



9



What **fraction** of the diagram is shaded?



1m

YSGOL CYMERAU

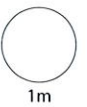
10 Megan wants an orange.



55p

She has **30p**.

How much **more** does she need?

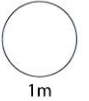
 p

1m







11 Jamie is **one metre** tall.

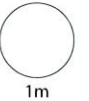
How many **centimetres** is that?

centimetres



12 Cross (X) the shape that is in the wrong place.

Has 4 sides	Does <b>not</b> have 4 sides
	
	
	



13



10 balloons  
in each  
packet

How many balloons in **3** packets?

  
1m

Sima buys **50** balloons.

How many packets does she buy?

  
1m

14

How heavy is the sugar?

Circle your answer.



1 millilitre

1 metre

1 litre

1 kilogram

  
1m

How much milk?

Circle your answer.



1 centimetre

1 gram

1 metre

1 litre

  
1m



15



**Books  
30p each**

Katie buys **three** books.

She pays with a **£1** coin.



How much change does Katie get?

A large rectangular box with a blue border, intended for writing the answer. In the top-left corner, there is a small icon of a notepad with a pencil. In the bottom-right corner of the box, there is a smaller rectangular box containing the letter 'p', indicating the unit for the answer.

YSGOL CYMERAU

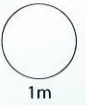
2m

16 Tom's money:



He spends **half**.

How much does he spend?

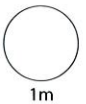


17



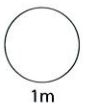
Use two of these signs to make a number sentence.

10 ○ 2 ○ 5



Now make a **different** number sentence.

10 ○ 2 ○ 5




18

$$37 + 56 = 56 + \boxed{\phantom{00}}$$

1m

19



5 lollies cost 20p.

How much do 15 lollies cost?

**p**

2m

YSGOL CYMERAU